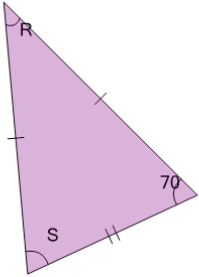


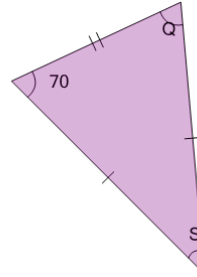


Geometry of Triangles - Isosceles, Solve Angle from Double Angle

**1**

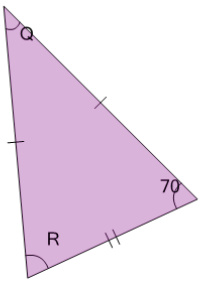
What do we know about angle 'R'?

A	70	B	55
C	60	D	45
E	50	F	40

2

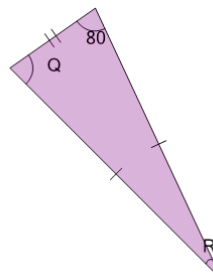
What do we know about angle 'S'?

A	60	B	50
C	40	D	70
E	55	F	45

3

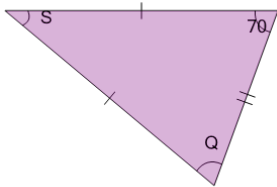
What do we know about angle 'Q'?

A	55	B	70
C	40	D	45
E	50	F	60

4

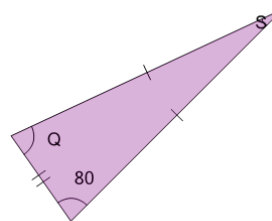
What do we know about angle 'R'?

A	45	B	50
C	60	D	70
E	55	F	20

5

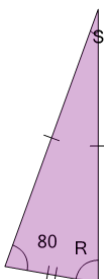
What do we know about angle 'S'?

A	55	B	50
C	60	D	45
E	70	F	40

6

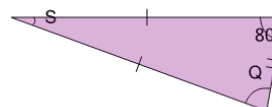
What do we know about angle 'Q'?

A	55	B	50
C	60	D	45
E	80	F	70

7

What do we know about angle 'R'?

A	45	B	55
C	70	D	80
E	60	F	50

8

What do we know about angle 'S'?

A	60	B	20
C	50	D	70
E	45	F	55