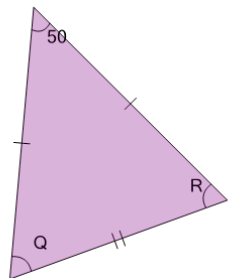


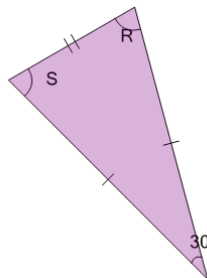


Geometry of Triangles - Isosceles, Solve Angle from Single Angle

**1**

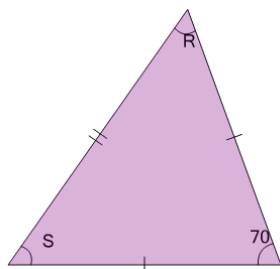
What do we know about angle 'Q'?

A	55	B	60
C	70	D	45
E	50	F	65

2

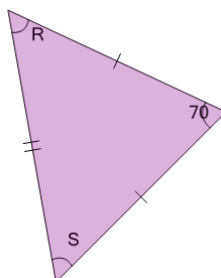
What do we know about angle 'S'?

A	55	B	50
C	70	D	60
E	75	F	45

3

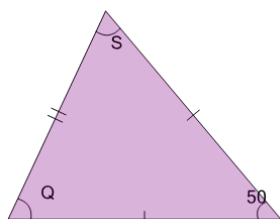
What do we know about angle 'R'?

A	60	B	55
C	45	D	50
E	70	F	90

4

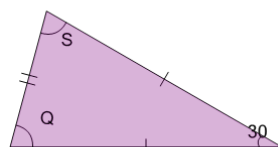
What do we know about angle 'R'?

A	60	B	50
C	45	D	70
E	55	F	90

5

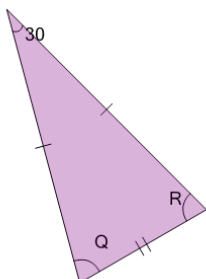
What do we know about angle 'S'?

A	70	B	60
C	55	D	50
E	65	F	45

6

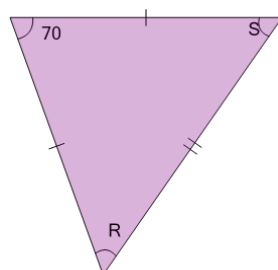
What do we know about angle 'Q'?

A	75	B	60
C	55	D	50
E	70	F	45

7

What do we know about angle 'Q'?

A	45	B	50
C	70	D	55
E	75	F	60

8

What do we know about angle 'R'?

A	60	B	50
C	70	D	90
E	55	F	45