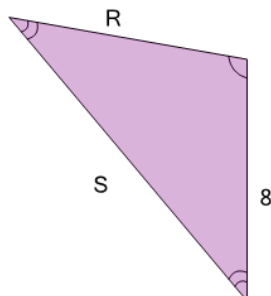


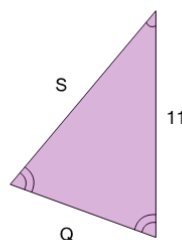


Geometry of Triangles - Isosceles, Solve Side from Double Side

**1**

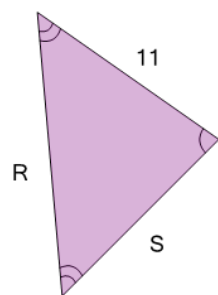
What do we know about side 'S'?

A	Unable to answer
B	13
C	9
D	8
E	12
F	10

2

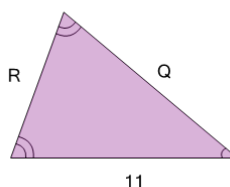
What do we know about side 'S'?

A	13	B	12
C	11	D	8
E	9	F	10

3

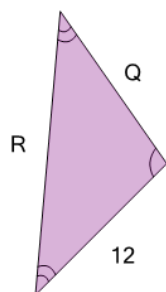
What do we know about side 'R'?

A	14
B	18
C	Unable to answer
D	15
E	12
F	11

4

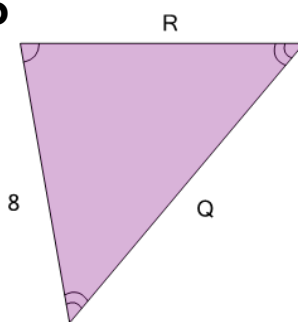
What do we know about side 'Q'?

A	12	B	15
C	11	D	13
E	14	F	8

5

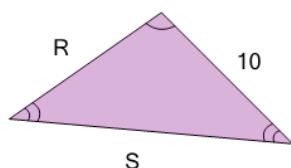
What do we know about side 'Q'?

A	14
B	11
C	10
D	Unable to answer
E	16
F	12

6

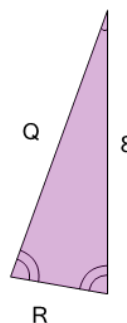
What do we know about side 'Q'?

A	6
B	8
C	Unable to answer
D	9
E	7
F	10

7

What do we know about side 'S'?

A	15
B	17
C	10
D	Unable to answer
E	11
F	14

8

What do we know about side 'Q'?

A	Unable to answer
B	10
C	9
D	8
E	7
F	4