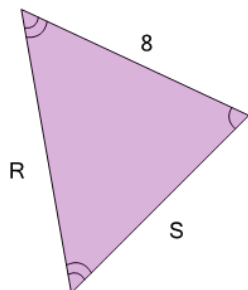


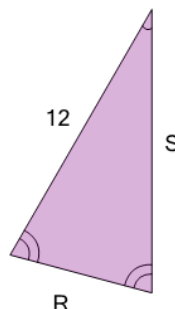


Geometry of Triangles - Isosceles, Solve Side from Double Side

**1**

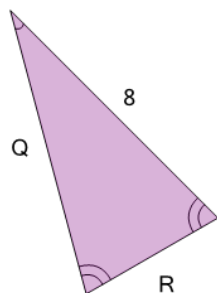
What do we know about side 'R'?

A	5
B	8
C	7
D	10
E	9
F	Unable to answer

2

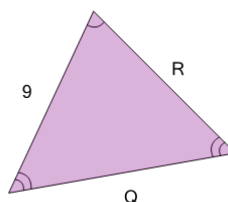
What do we know about side 'S'?

A	13
B	12
C	9
D	Unable to answer
E	10

3

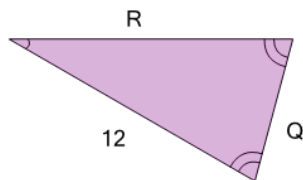
What do we know about side 'R'?

A	8
B	Unable to answer
C	6
D	4
E	5
F	0

4

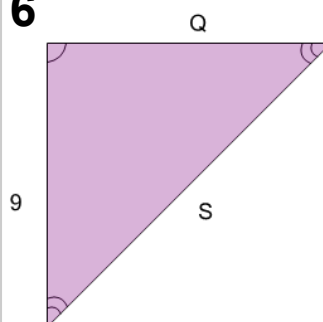
What do we know about side 'R'?

A	5	B	13
C	12	D	8
E	9	F	6

5

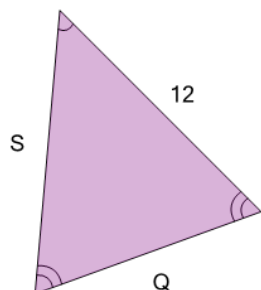
What do we know about side 'R'?

A	14
B	8
C	Unable to answer
D	15
E	10
F	12

6

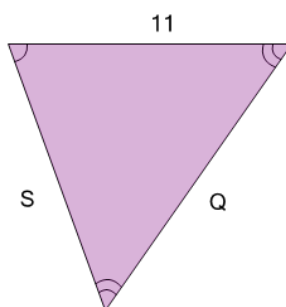
What do we know about side 'S'?

A	13
B	11
C	14
D	17
E	Unable to answer
F	9

7

What do we know about side 'Q'?

A	8
B	Unable to answer
C	12
D	10
E	11
F	13

8

What do we know about side 'Q'?

A	Unable to answer
B	11
C	13
D	12
E	15
F	14