
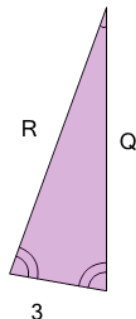


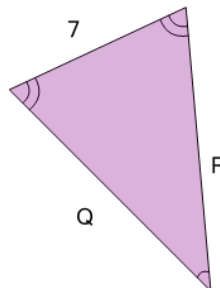


## Geometry of Triangles - Isosceles, Solve Side from Single Side

**1**

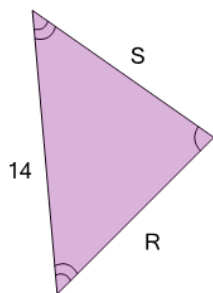
What do we know about side 'Q'?

A	11
B	12
C	3
D	6
E	10
F	Unable to answer

**2**

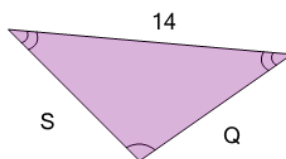
What do we know about side 'Q'?

A	13
B	10
C	7
D	Unable to answer
E	14
F	8

**3**

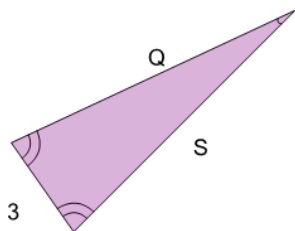
What do we know about side 'S'?

A	14
B	9
C	Unable to answer
D	8
E	11

**4**

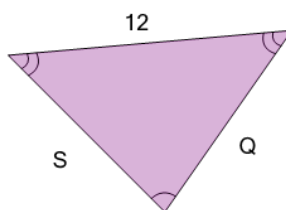
What do we know about side 'Q'?

A	9
B	11
C	10
D	14
E	7
F	Unable to answer

**5**

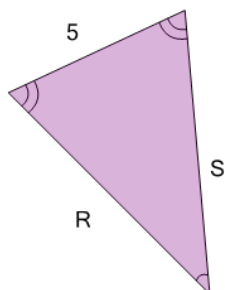
What do we know about side 'Q'?

A	14
B	12
C	10
D	Unable to answer
E	8
F	3

**6**

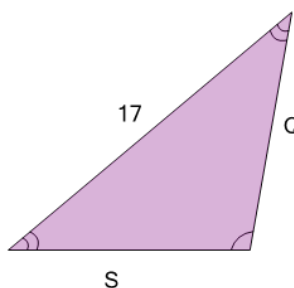
What do we know about side 'S'?

A	7
B	9
C	10
D	12
E	Unable to answer
F	11

**7**

What do we know about side 'R'?

A	10
B	8
C	Unable to answer
D	7
E	4
F	5

**8**

What do we know about side 'Q'?

A	13
B	Unable to answer
C	15
D	17
E	11
F	8