
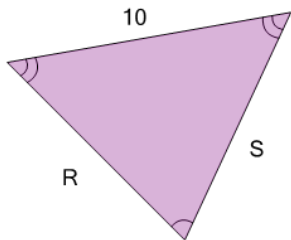


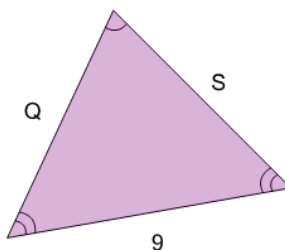


Geometry of Triangles - Isosceles, Solve Side from Single Side

**1**

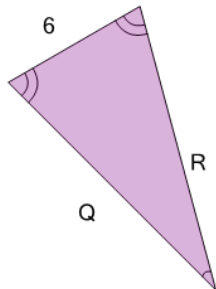
What do we know about side 'R'?

A	Unable to answer
B	9
C	12
D	11
E	10

2

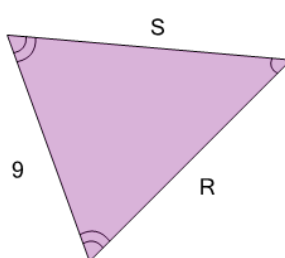
What do we know about side 'S'?

A	8
B	10
C	Unable to answer
D	4
E	9
F	11

3

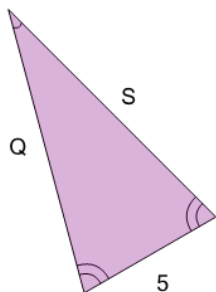
What do we know about side 'Q'?

A	10
B	8
C	Unable to answer
D	6
E	11
F	7

4

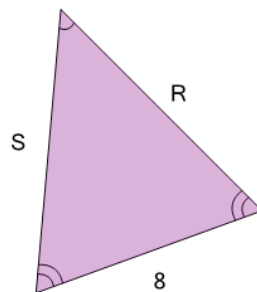
What do we know about side 'R'?

A	12
B	11
C	8
D	Unable to answer
E	9
F	15

5

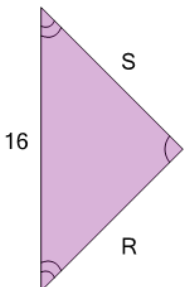
What do we know about side 'Q'?

A	9
B	13
C	10
D	6
E	Unable to answer
F	5

6

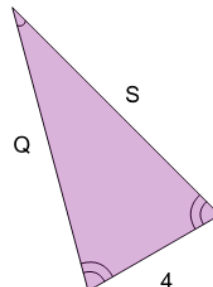
What do we know about side 'R'?

A	Unable to answer
B	7
C	10
D	8
E	6
F	13

7

What do we know about side 'R'?

A	11
B	14
C	16
D	Unable to answer
E	9

8

What do we know about side 'Q'?

A	10
B	4
C	9
D	8
E	Unable to answer
F	7