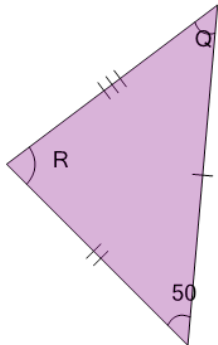


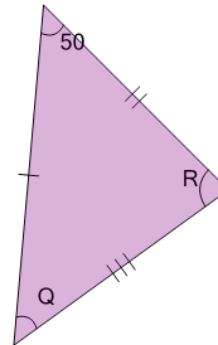


Geometry of Triangles - Scalene, Solve Angle

**1**

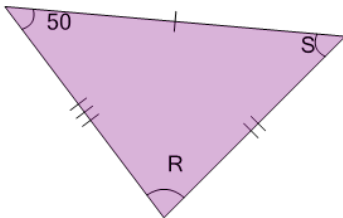
What do we know about angle 'Q'?

A	70
B	55
C	45
D	Unable to answer
E	60
F	50

2

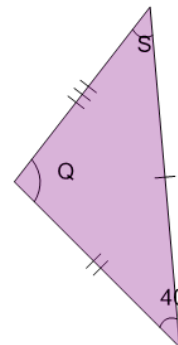
What do we know about angle 'R'?

A	70
B	60
C	45
D	Unable to answer
E	55
F	50

3

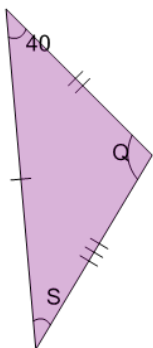
What do we know about angle 'S'?

A	Unable to answer
B	70
C	50
D	55
E	45
F	60

4

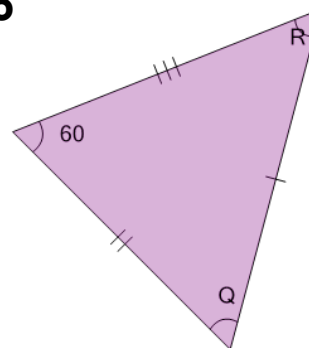
What do we know about angle 'Q'?

A	Unable to answer
B	50
C	45
D	55
E	60
F	70

5

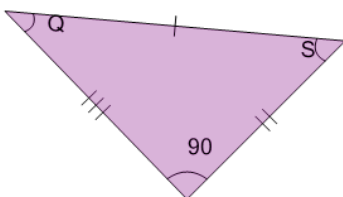
What do we know about angle 'Q'?

A	55
B	50
C	Unable to answer
D	45
E	60
F	70

6

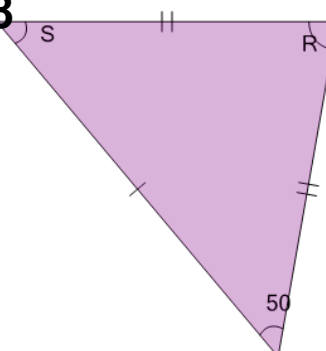
What do we know about angle 'R'?

A	55
B	50
C	70
D	45
E	60
F	Unable to answer

7

What do we know about angle 'S'?

A	60
B	55
C	Unable to answer
D	45
E	50
F	70

8

What do we know about angle 'S'?

A	50
B	55
C	70
D	Unable to answer
E	60
F	45