






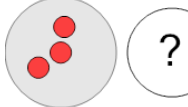

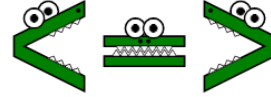

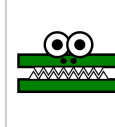







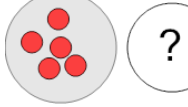

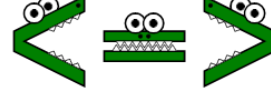







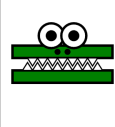
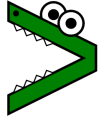
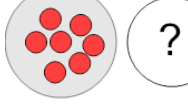

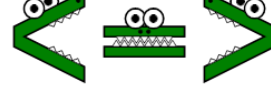

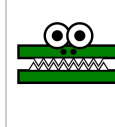



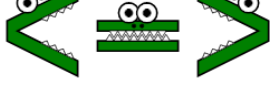
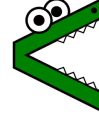

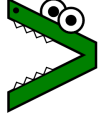
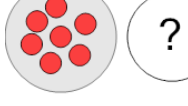

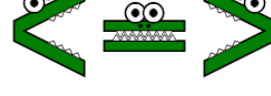

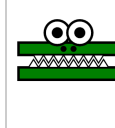




## Less Than or Greater Than with Alligators - Picture Comparison to Alligator



<b>1</b> Which way would the alligator face to eat the larger group?   	<b>A</b> 	<b>B</b> 	<b>C</b> 
<b>2</b> Which way would the alligator face to eat the larger group?   	<b>A</b> 	<b>B</b> 	<b>C</b> 
<b>3</b> Which way would the alligator face to eat the larger group?   	<b>A</b> 	<b>B</b> 	<b>C</b> 
<b>4</b> Which way would the alligator face to eat the larger group?   	<b>A</b> 	<b>B</b> 	<b>C</b> 
<b>5</b> Which way would the alligator face to eat the larger group?   	<b>A</b> 	<b>B</b> 	<b>C</b> 
<b>6</b> Which way would the alligator face to eat the larger group?   	<b>A</b> 	<b>B</b> 	<b>C</b> 
<b>7</b> Which way would the alligator face to eat the larger group?   	<b>A</b> 	<b>B</b> 	<b>C</b> 
<b>8</b> Which way would the alligator face to eat the larger group?   	<b>A</b> 	<b>B</b> 	<b>C</b> 