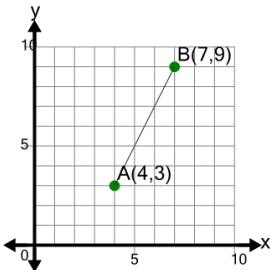


## Line Segment (Graph) - Find Midpoint (Coordinate)

**1** Find the mid-point of segment AB

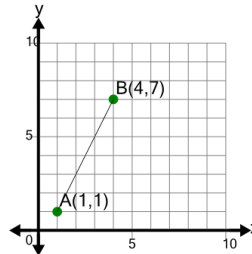


A (5, 6.5) B (5.5, 6.5)

C (5.5, 6)

**2**

Find the mid-point of segment AB



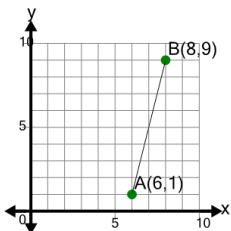
A (1.5, 3)

B (2.5, 4)

C (3.5, 4)

**3**

Find the mid-point of segment AB



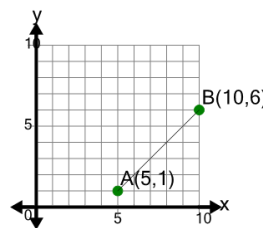
A (7, 7.5)

B (7, 5)

C (7, 7)

**4**

Find the mid-point of segment AB

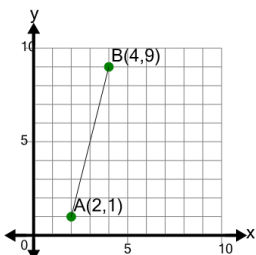


A (7.5, 5.5) B (7.5, 3.5)

C (8, 6)

**5**

Find the mid-point of segment AB



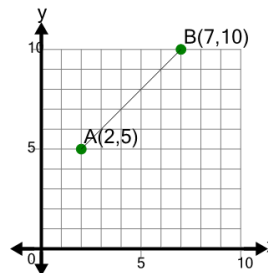
A (3, 5)

B (4, 6.5)

C (3, 5.5)

**6**

Find the mid-point of segment AB

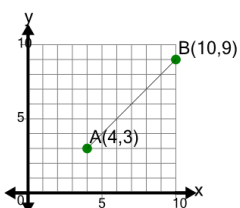


A (5, 6.5) B (4.5, 6)

C (4.5, 7.5)

**7**

Find the mid-point of segment AB



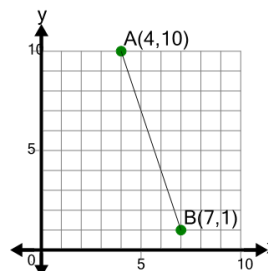
A (7.5, 7)

B (7, 6)

C (7, 7.5)

**8**

Find the mid-point of segment AB



A (5.5, 5.5) B (5.5, 2.5)

C (5.5, 1.5)