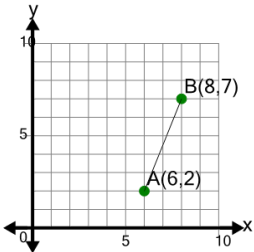




Line Segment (Graph) - Find Midpoint (Coordinate)

1 Find the mid-point of segment AB

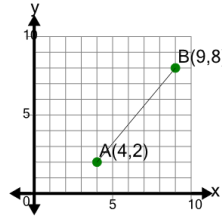


A (7, 6.5) B (7, 4.5)

C (7.5, 6.5)

2

Find the mid-point of segment AB



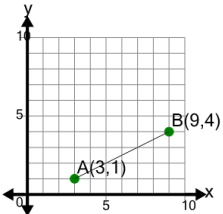
A (6.5, 6)

B (6.5, 5)

C (7.5, 7)

3

Find the mid-point of segment AB



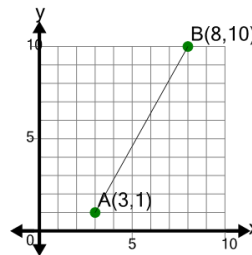
A (6, 2.5)

B (6, 3.5)

C (7, 4.5)

4

Find the mid-point of segment AB

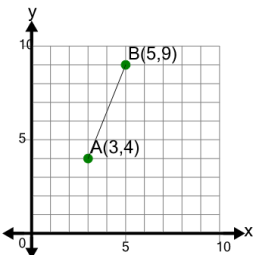


A (5.5, 5.5) B (5.5, 6.5)

C (6, 6.5)

5

Find the mid-point of segment AB



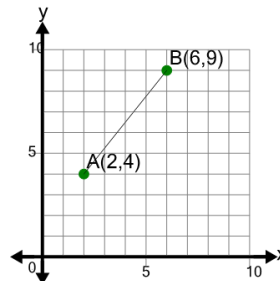
A (4, 6)

B (3.5, 6)

C (4, 6.5)

6

Find the mid-point of segment AB

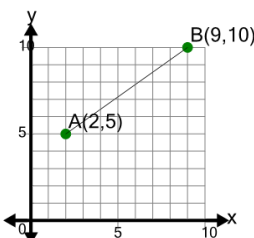


A (4, 5.5) B (4, 6.5)

C (3.5, 5.5)

7

Find the mid-point of segment AB

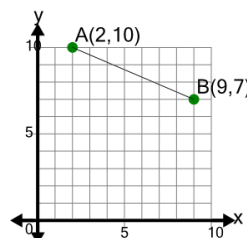


A (5.5, 7.5) B (5.5, 5)

C (5.5, 7)

8

Find the mid-point of segment AB



A (5.5, 8.5) B (6.5, 5.5)

C (4.5, 3.5)