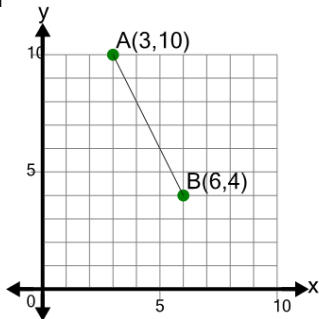
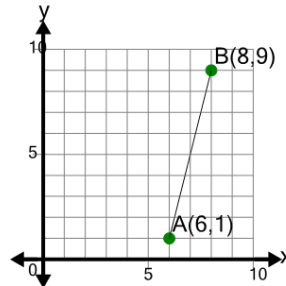


Line Segment (Graph) - Find Midpoint (True/False)

1

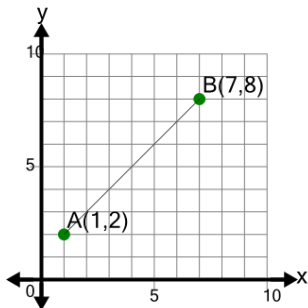
Is the mid-point of segment AB equal to (5.5, 3.5)

A	B
No	Yes

2

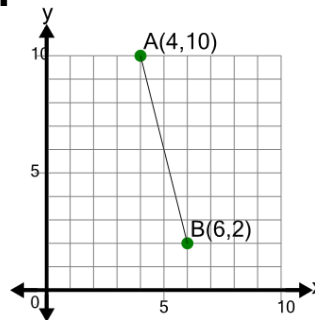
Is the mid-point of segment AB equal to (7, 7.5)

A	B
No	Yes

3

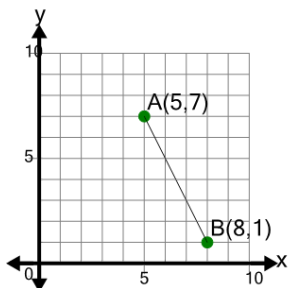
Is the mid-point of segment AB equal to (5, 4.5)

A	B
No	Yes

4

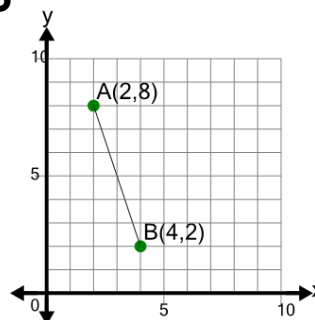
Is the mid-point of segment AB equal to (5, 6)

A	B
Yes	No

5

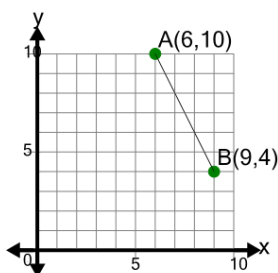
Is the mid-point of segment AB equal to (6.5, 2.5)

A	B
No	Yes

6

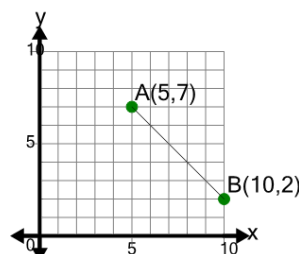
Is the mid-point of segment AB equal to (3.5, 2)

A	B
No	Yes

7

Is the mid-point of segment AB equal to (7.5, 7)

A	B
Yes	No

8

Is the mid-point of segment AB equal to (7.5, 4.5)

A	B
Yes	No