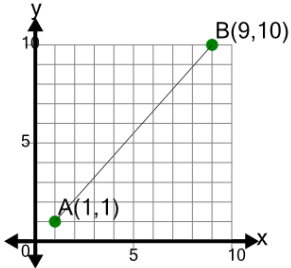


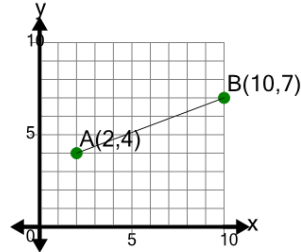


Line Segment (Graph) - Find Midpoint (True/False)

1

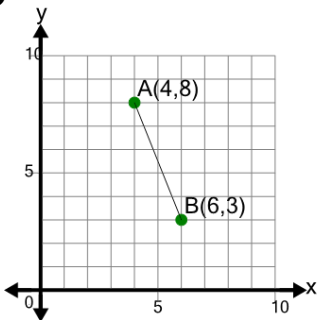
Is the mid-point of segment AB equal to (5, 5.5)

A	B
Yes	No

2

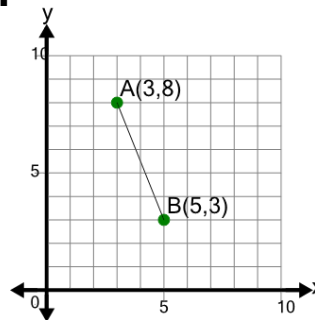
Is the mid-point of segment AB equal to (6, 5.5)

A	B
Yes	No

3

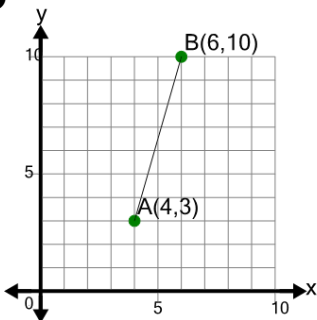
Is the mid-point of segment AB equal to (5, 3.5)

A	B
No	Yes

4

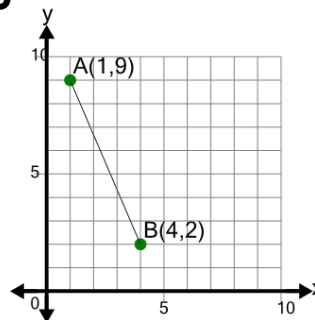
Is the mid-point of segment AB equal to (4, 5.5)

A	B
Yes	No

5

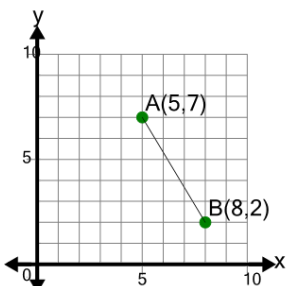
Is the mid-point of segment AB equal to (5, 6.5)

A	B
Yes	No

6

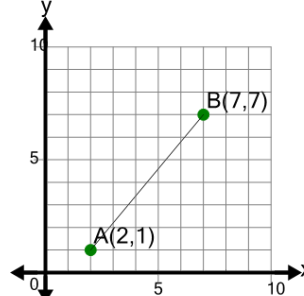
Is the mid-point of segment AB equal to (2.5, 5.5)

A	B
Yes	No

7

Is the mid-point of segment AB equal to (7, 3.5)

A	B
No	Yes

8

Is the mid-point of segment AB equal to (4.5, 5)

A	B
No	Yes