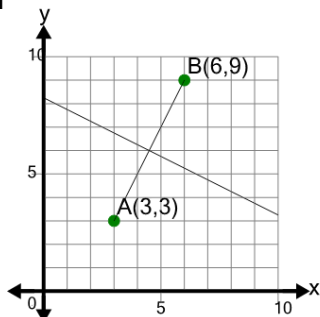




## Line Segment (Graph) - Find Perpendicular Slope (True/False)

1



Is the slope of the  
PERPENDICULAR to segment AB  
equal to 2

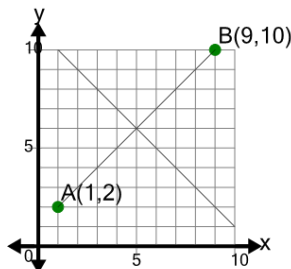
A

No

B

Yes

2



Is the slope of the  
PERPENDICULAR to segment AB  
equal to -1

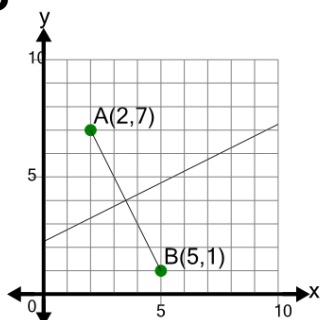
A

Yes

B

No

3



Is the slope of the  
PERPENDICULAR to segment AB  
equal to 1/2

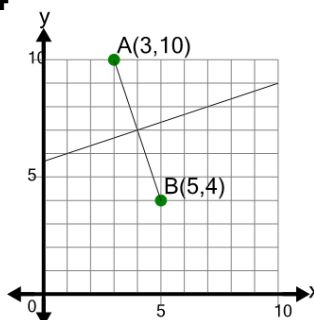
A

Yes

B

No

4



Is the slope of the  
PERPENDICULAR to segment AB  
equal to 1/3

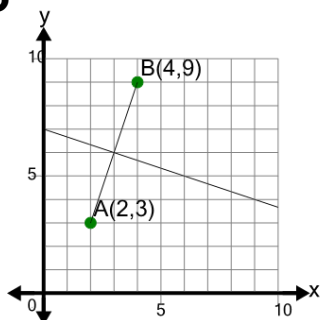
A

Yes

B

No

5



Is the slope of the PERPENDICULAR  
to segment AB equal to -1/3

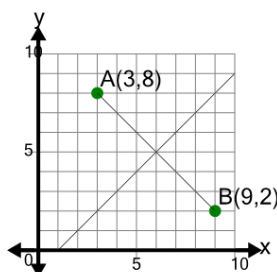
A

Yes

B

No

6



Is the slope of the  
PERPENDICULAR to segment AB  
equal to 1

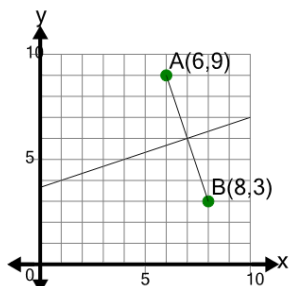
A

Yes

B

No

7



Is the slope of the  
PERPENDICULAR to segment AB  
equal to -3

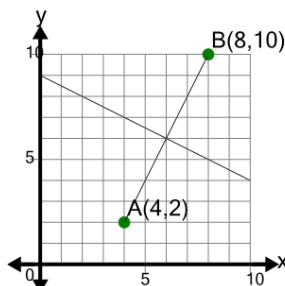
A

No

B

Yes

8



Is the slope of the  
PERPENDICULAR to segment AB  
equal to 2

A

No

B

Yes