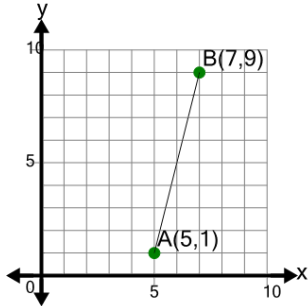


Line Segment (Graph) - Find Slope (True/False)

1

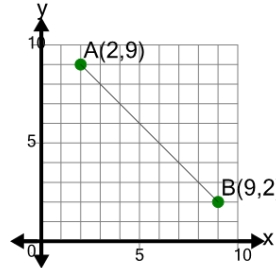
Is the slope of segment AB equal to 4

A

Yes

B

No

2

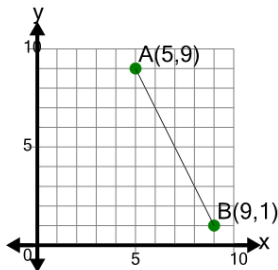
Is the slope of segment AB equal to -1

A

No

B

Yes

3

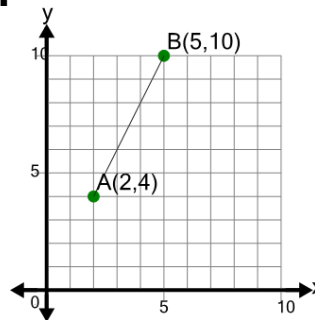
Is the slope of segment AB equal to -2

A

Yes

B

No

4

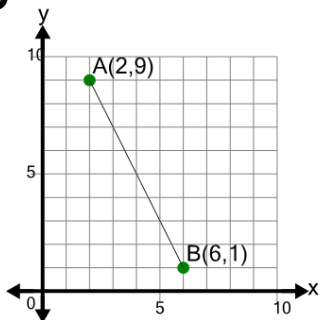
Is the slope of segment AB equal to 1/2

A

No

B

Yes

5

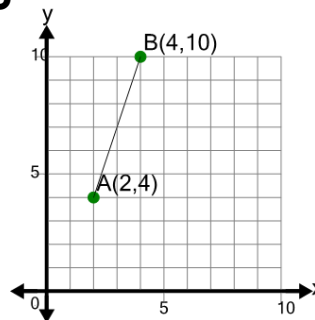
Is the slope of segment AB equal to -2

A

Yes

B

No

6

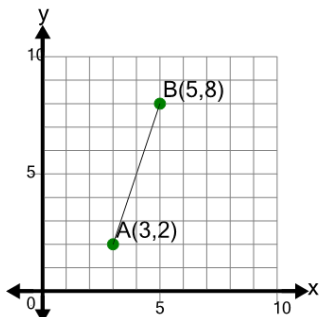
Is the slope of segment AB equal to 1/3

A

No

B

Yes

7

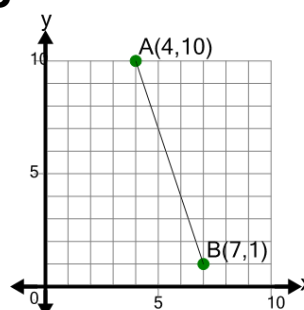
Is the slope of segment AB equal to 3

A

Yes

B

No

8

Is the slope of segment AB equal to -1/3

A

No

B

Yes