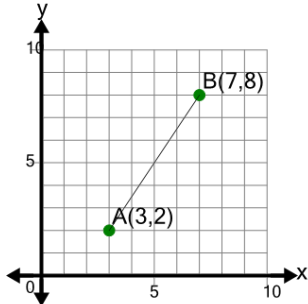
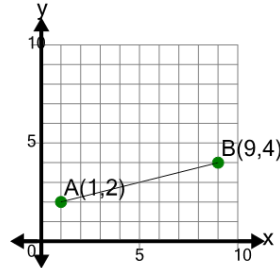


Line Segment (Graph) - Find Slope (True/False)

1

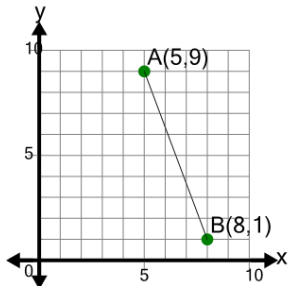
Is the slope of segment AB equal to $\frac{2}{3}$

A	B
No	Yes

2

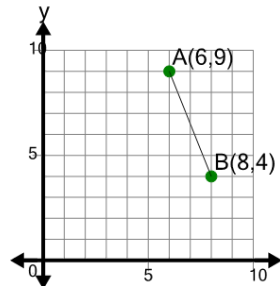
Is the slope of segment AB equal to 4

A	B
No	Yes

3

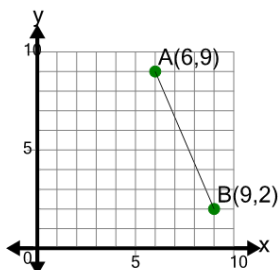
Is the slope of segment AB equal to $-\frac{8}{3}$

A	B
Yes	No

4

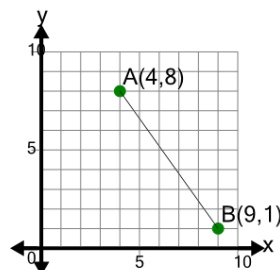
Is the slope of segment AB equal to $-\frac{5}{2}$

A	B
Yes	No

5

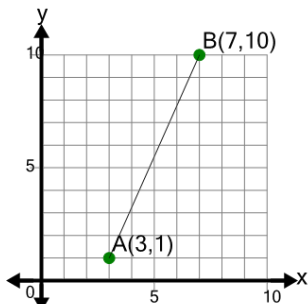
Is the slope of segment AB equal to $-\frac{7}{3}$

A	B
Yes	No

6

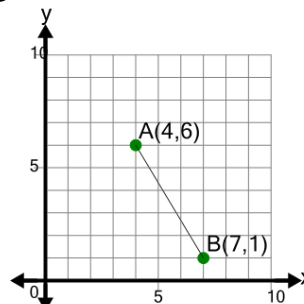
Is the slope of segment AB equal to $-\frac{5}{7}$

A	B
No	Yes

7

Is the slope of segment AB equal to $\frac{4}{9}$

A	B
No	Yes

8

Is the slope of segment AB equal to $-\frac{3}{5}$

A	B
No	Yes