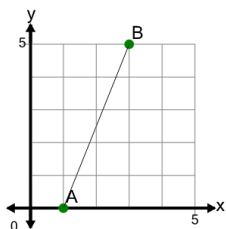




## Slope of a Line Between Two Points on Graph - Decimal

**1**

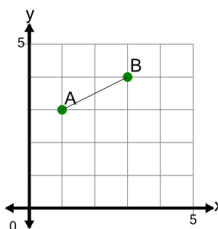
Find the slope of the line between Point A and Point B



A	-1.5	B	2.5
C	0.4	D	0
E	3	F	0.5

**2**

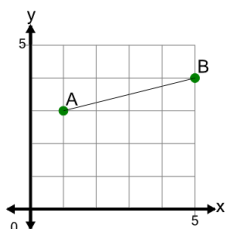
Find the slope of the line between Point A and Point B



A	2	B	1.1
C	0.8	D	1.4
E	-0.1	F	0.5

**3**

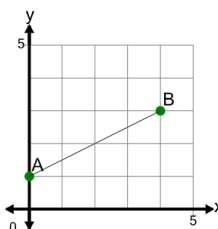
Find the slope of the line between Point A and Point B



A	4	B	0
C	0.4	D	0.15
E	0.5	F	0.25

**4**

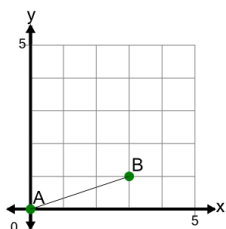
Find the slope of the line between Point A and Point B



A	-1.75	B	0.5
C	2	D	0
E	-1.25	F	1.2

**5**

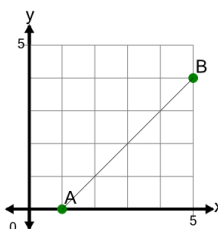
Find the slope of the line between Point A and Point B



A	1.25	B	0.33
C	-0.13	D	-1.25
E	3	F	2

**6**

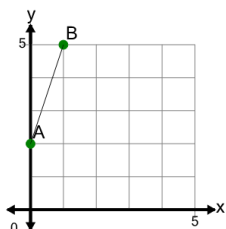
Find the slope of the line between Point A and Point B



A	-0.2	B	1.2
C	2	D	2.6
E	1	F	0.5

**7**

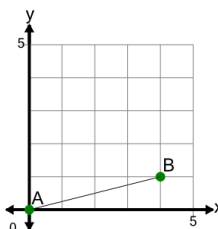
Find the slope of the line between Point A and Point B



A	6	B	1
C	0.33	D	-2.25
E	3	F	-0.25

**8**

Find the slope of the line between Point A and Point B



A	-2	B	-1.25
C	0.25	D	0.75
E	4	F	0.15