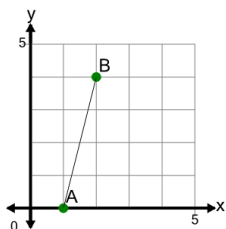


Slope of a Line Between Two Points on Graph - Integer

1

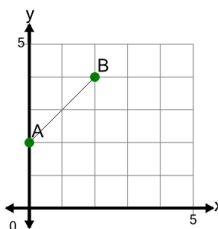
Find the slope of the line between Point A and Point B



A	6.4	B	11.2
C	-1.5	D	-2.5
E	0.25	F	4

2

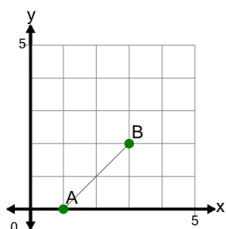
Find the slope of the line between Point A and Point B



A	1	B	-0.8
C	0	D	1.75
E	-2	F	-0.5

3

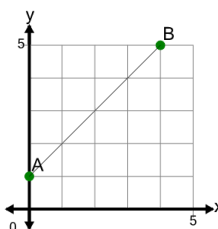
Find the slope of the line between Point A and Point B



A	2.8	B	1
C	0.6	D	0.75
E	0.4	F	-0.6

4

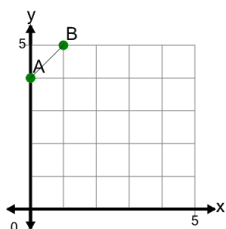
Find the slope of the line between Point A and Point B



A	-2.5	B	1.2
C	1	D	-1
E	1.75	F	-0.8

5

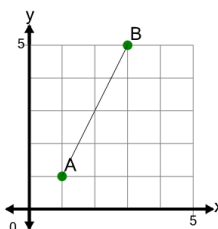
Find the slope of the line between Point A and Point B



A	2.6	B	2.5
C	-0.8	D	-1
E	2	F	1

6

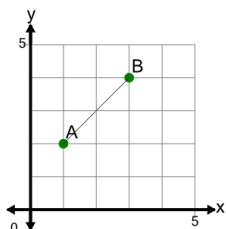
Find the slope of the line between Point A and Point B



A	1.25	B	0
C	-1.2	D	2
E	0.5	F	-2

7

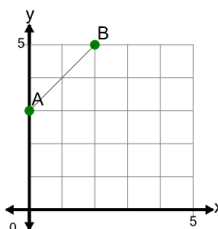
Find the slope of the line between Point A and Point B



A	0.6	B	0.8
C	0.75	D	2.2
E	-1.25	F	1

8

Find the slope of the line between Point A and Point B



A	-0.25	B	-1
C	-1.75	D	0.8
E	2.2	F	1