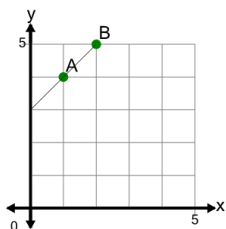




Slope of a Line from Graph (with points) - Integer

**1**

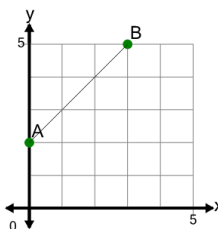
Find the slope of the line between Point A and Point B



A	1	B	2.6
C	0.75	D	0.4
E	2.25	F	2.5

2

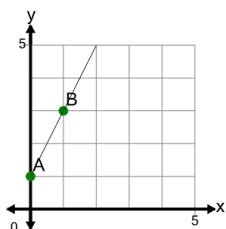
Find the slope of the line between Point A and Point B



A	1.8	B	0.6
C	1	D	-1.5
E	-2.25	F	2

3

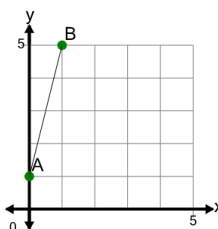
Find the slope of the line between Point A and Point B



A	2	B	1.2
C	-2	D	-0.25
E	2.4	F	5.2

4

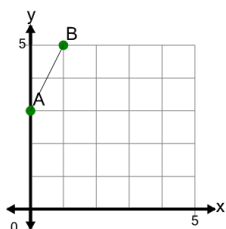
Find the slope of the line between Point A and Point B



A	-3.2	B	2.25
C	4	D	-1.5
E	7.2	F	0.25

5

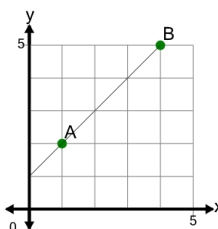
Find the slope of the line between Point A and Point B



A	0.5	B	1.25
C	-0.25	D	2
E	5.2	F	4.4

6

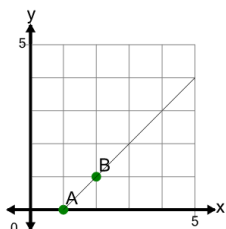
Find the slope of the line between Point A and Point B



A	1	B	2
C	-2	D	-2.25
E	0.8	F	-0.4

7

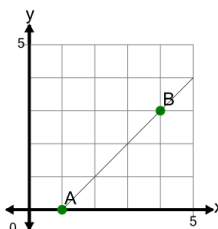
Find the slope of the line between Point A and Point B



A	1.8	B	-1.75
C	-0.2	D	0.6
E	1.5	F	1

8

Find the slope of the line between Point A and Point B



A	1	B	2.8
C	-0.2	D	1.2
E	2.4	F	2