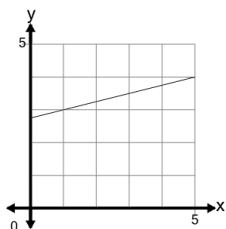




## Slope of a Line from Graph (without points) - Decimal

**1**

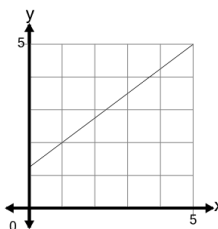
Find the slope of the line



A	0.75	B	0.1
C	2	D	0.25
E	0	F	1

**2**

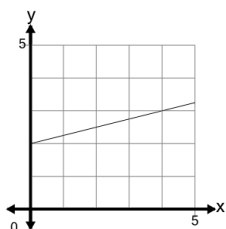
Find the slope of the line



A	1.95	B	-0.75
C	1.33	D	-0.45
E	2.5	F	0.75

**3**

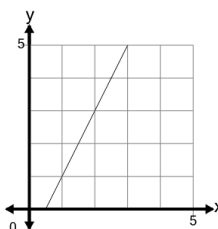
Find the slope of the line



A	1.25	B	4
C	-0.75	D	2.25
E	0.25	F	-0.2

**4**

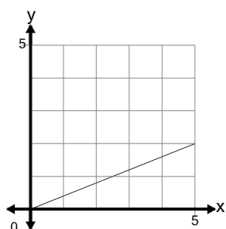
Find the slope of the line



A	2.8	B	2
C	-1.2	D	-2.25
E	0.5	F	4.8

**5**

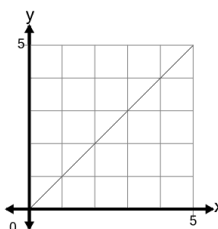
Find the slope of the line



A	1.12	B	0.4
C	2.25	D	0
E	2.5	F	0.8

**6**

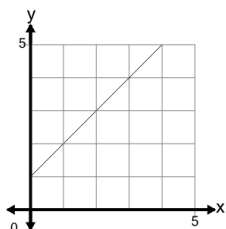
Find the slope of the line



A	-0.8	B	1
C	-1	D	2.25
E	0.4	F	0.5

**7**

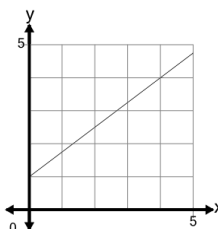
Find the slope of the line



A	2.5	B	2.2
C	-2.25	D	1
E	1.6	F	1.75

**8**

Find the slope of the line



A	0.75	B	1.33
C	1.2	D	1.35
E	0.45	F	-0.75