


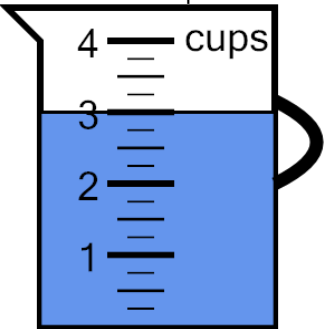


Measure Volume (cups) - Wholes



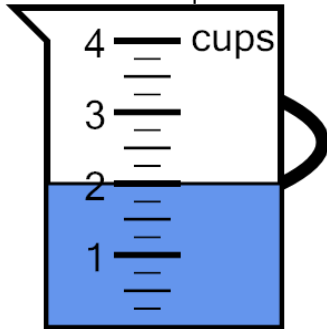
1 Measure the volume of water in the measuring cup

A	B	C
6 cups	9 cups	8 cups
D	E	F
12 cups	4 cups	3 cups



2 Measure the volume of water in the measuring cup

A	B	C
6 cups	5 cups	11 cups
D	E	F
4 cups	2 cups	8 cups



3 Measure the volume of water in the measuring cup

A	B	C
3 cups	8 cups	9 cups
D	E	F
2 cups	1 cups	6 cups

