
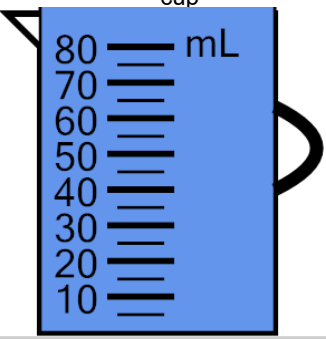
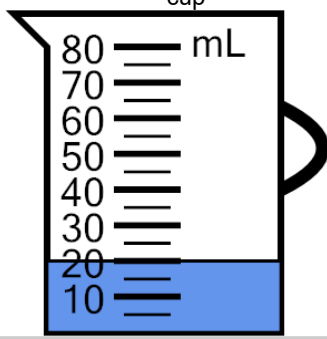
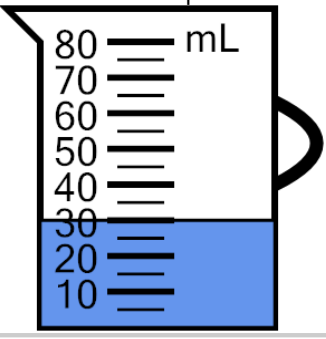
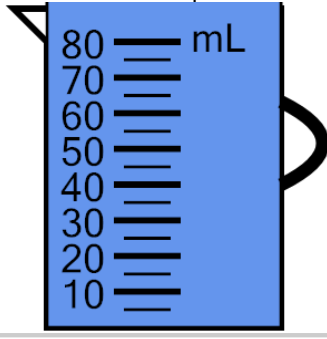
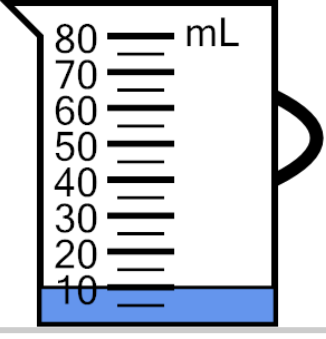
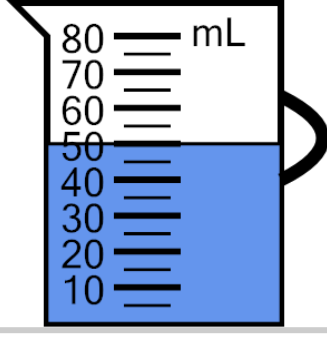
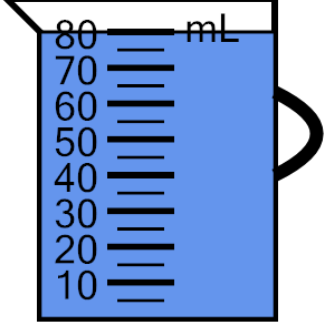
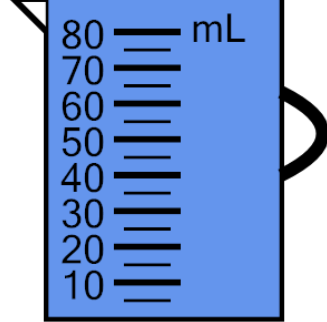




## Measure Volume (milliliters) - Tens, Fully Marked



<b>1</b> Measure the volume of water in the measuring cup 	A 130 mL	B 110 mL	C 125 mL	<b>2</b> Measure the volume of water in the measuring cup 	A 20 mL	B 0 mL	C 25 mL
	D 115 mL	E 95 mL	F 80 mL		D 35 mL	E 45 mL	F 5 mL
<b>3</b> Measure the volume of water in the measuring cup 	A 55 mL	B 45 mL	C 40 mL	<b>4</b> Measure the volume of water in the measuring cup 	A 125 mL	B 140 mL	C 160 mL
	D 15 mL	E 30 mL	F 50 mL		D 155 mL	E 110 mL	F 115 mL
<b>5</b> Measure the volume of water in the measuring cup 	A 25 mL	B 30 mL	C 20 mL	<b>6</b> Measure the volume of water in the measuring cup 	A 65 mL	B 40 mL	C 45 mL
	D 35 mL	E 15 mL	F 10 mL		D 70 mL	E 50 mL	F 35 mL
<b>7</b> Measure the volume of water in the measuring cup 	A 90 mL	B 70 mL	C 105 mL	<b>8</b> Measure the volume of water in the measuring cup 	A 125 mL	B 155 mL	C 135 mL
	D 85 mL	E 95 mL	F 80 mL		D 145 mL	E 105 mL	F 130 mL