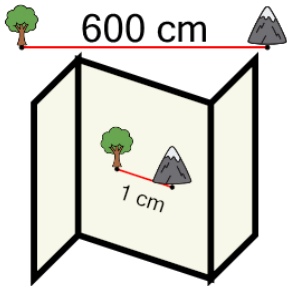


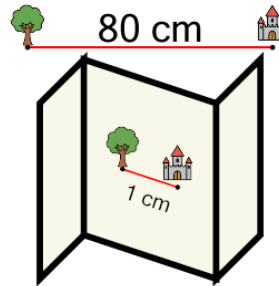
## Metric Unit Scale on Map - Find Scale - Less than 1000 - Same Single Unit

**1** 1 cm on the map represents 600 cm. What is the scale of the map?



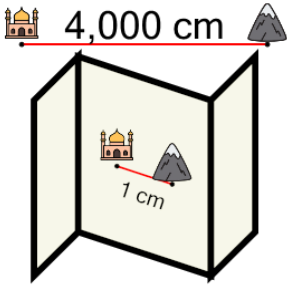
A	1:6	B	1:60,000
C	1:6,000	D	1:600
E	1:60		

**2** 1 cm on the map represents 80 cm. What is the scale of the map?



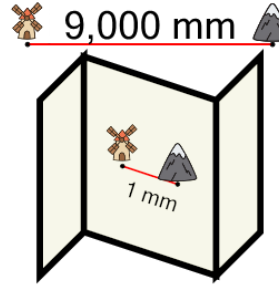
A	1:8	B	1:80
C	1:1	D	1:80,000
E	1:0		

**3** 1 cm on the map represents 4,000 cm. What is the scale of the map?



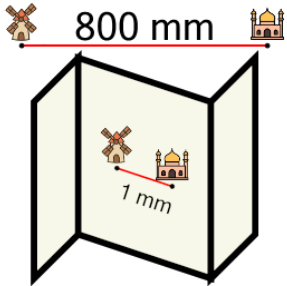
A	1:400	B	1:400,000
C	1:40,000	D	1:40
E	1:4	F	1:4,000

**4** 1 mm on the map represents 9,000 mm. What is the scale of the map?



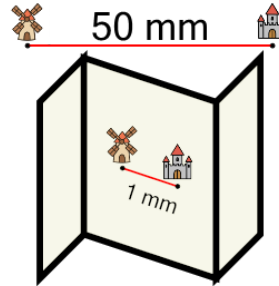
A	1:90	B	1:9,000
C	1:9,000,000	D	1:90,000
E	1:900,000	F	1:900

**5** 1 mm on the map represents 800 mm. What is the scale of the map?



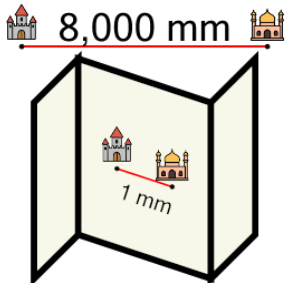
A	1:800,000	B	1:8
C	1:800	D	1:80,000
E	1:80	F	1:8,000

**6** 1 mm on the map represents 50 mm. What is the scale of the map?



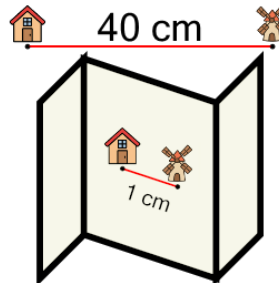
A	1:0	B	1:50
C	1:1	D	1:500
E	1:50,000	F	1:5,000

**7** 1 mm on the map represents 8,000 mm. What is the scale of the map?



A	1:80,000	B	1:8,000
C	1:800,000	D	1:8,000,000

**8** 1 cm on the map represents 40 cm. What is the scale of the map?



A	1:0	B	1:400
C	1:4	D	1:4,000
E	1:40	F	1:40,000