
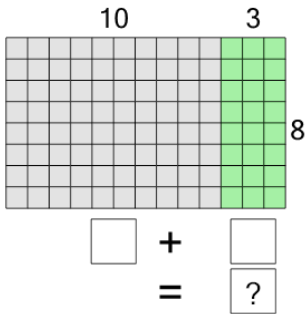




Multiplication Area Model - Teens to Total

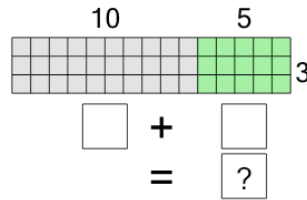


1 Use the area model to find the product of 13 and 8



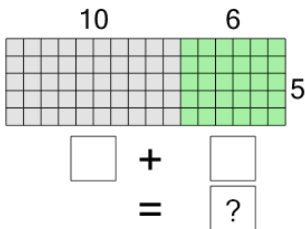
A	B	C
99	104	100
D	E	F
102	107	101

2 Use the area model to find the product of 15 and 3



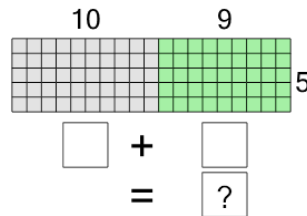
A	B	C
40	43	45
D	E	F
49	48	42

3 Use the area model to find the product of 16 and 5



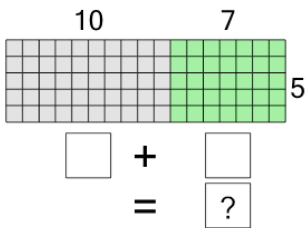
A	B	C
83	78	84
D	E	F
80	76	75

4 Use the area model to find the product of 19 and 5



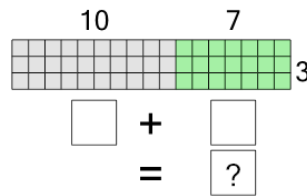
A	B	C
95	99	97
D	E	F
90	93	98

5 Use the area model to find the product of 17 and 5



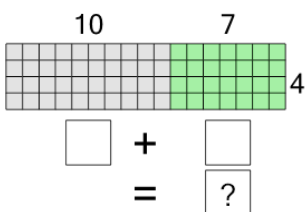
A	B	C
81	82	89
D	E	F
80	85	88

6 Use the area model to find the product of 17 and 3



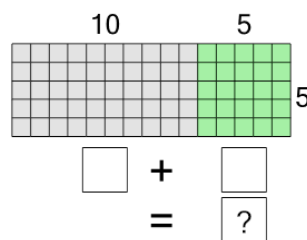
A	B	C
51	46	55
D	E	F
54	47	53

7 Use the area model to find the product of 17 and 4



A	B	C
63	66	72
D	E	F
70	68	71

8 Use the area model to find the product of 15 and 5



A	B	C
72	77	70
D	E	F
75	79	71