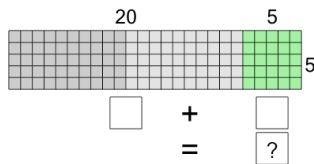




Multiplication Area Model - Twenties to Total

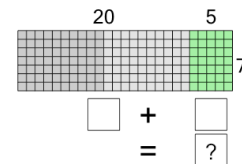


1 Use the area model to find the product of 25 and 5



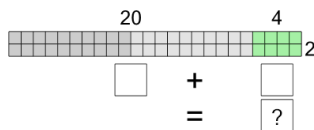
A	B	C	D	E	F
125	129	122	121	120	128

2 Use the area model to find the product of 25 and 7



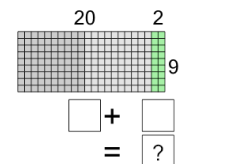
A	B	C	D	E	F
170	173	172	171	179	175

3 Use the area model to find the product of 24 and 2



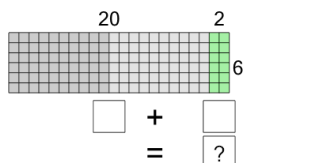
A	B	C	D	E	F
44	43	46	52	50	48

4 Use the area model to find the product of 22 and 9



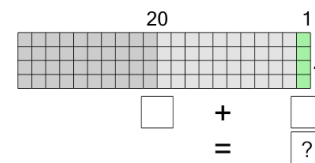
A	B	C	D	E	F
200	198	195	193	194	201

5 Use the area model to find the product of 22 and 6



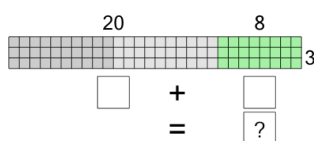
A	B	C	D	E	F
132	136	134	135	127	129

6 Use the area model to find the product of 21 and 4



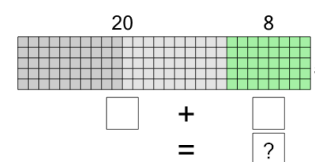
A	B	C	D	E	F
86	80	82	84	79	81

7 Use the area model to find the product of 28 and 3



A	B	C	D	E	F
86	84	80	79	81	82

8 Use the area model to find the product of 28 and 5



A	B	C	D	E	F
144	137	140	142	143	136