

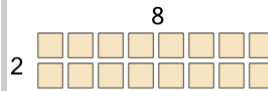


Multiplication - From Grid Model to Answer

1


Use multiplication to count how many candies there are

A	27	B	20
C	13	D	25
E	12	F	18

2


Use multiplication to count how many squares there are

A	8	B	6
C	22	D	16
E	12	F	20

3

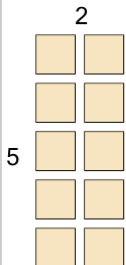
Use multiplication to count how many oranges there are

A	7	B	3
C	1	D	10
E	6	F	2

4

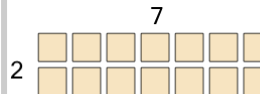
Use multiplication to count how many oranges there are

A	6	B	13
C	15	D	7
E	10	F	19

5


Use multiplication to count how many squares there are

A	16	B	2
C	14	D	4
E	10	F	8

6


Use multiplication to count how many squares there are

A	18	B	14
C	12	D	6
E	5	F	15

7

Use multiplication to count how many apples there are

A	22	B	7
C	18	D	20
E	19	F	15

8

Use multiplication to count how many donuts there are

A	8	B	16
C	2	D	38
E	20	F	34