



Multiplication - From Grid Model to Answer

1

Use multiplication to count how many oranges there are

A	4	B	24
C	34	D	16
E	20	F	8

2


Use multiplication to count how many donuts there are

A	17	B	16
C	10	D	23
E	19	F	22

3

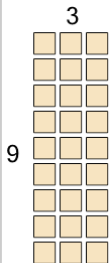
Use multiplication to count how many apples there are

A	35	B	21
C	39	D	19
E	27	F	25

4

Use multiplication to count how many circles there are

A	16	B	14
C	19	D	22
E	26	F	18

5


Use multiplication to count how many squares there are

A	41	B	27
C	35	D	7
E	37	F	43

6

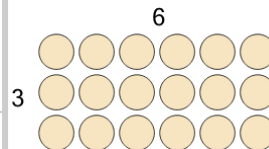
Use multiplication to count how many ice creams there are

A	18	B	60
C	33	D	36
E	45	F	57

7

Use multiplication to count how many circles there are

A	35	B	38
C	11	D	29
E	32	F	53

8

Use multiplication to count how many circles there are

A	18	B	25
C	8	D	15
E	23	F	17