



Multiplication - From Grid Model to Equation

1


What multiplication equation would help you count the oranges

- | | | | |
|---|--------------|---|--------------|
| A | 7×6 | B | 3×5 |
| C | 5×6 | D | 4×3 |
| E | 7×4 | | |

2


What multiplication equation would help you count the apples

- | | | | |
|---|--------------|---|--------------|
| A | 5×4 | B | 7×5 |
| C | 4×3 | D | 5×8 |
| E | 2×5 | | |

3

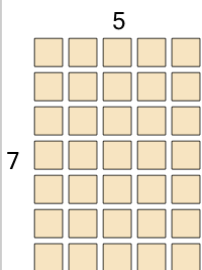
What multiplication equation would help you count the apples

- | | | | |
|---|--------------|---|--------------|
| A | 4×7 | B | 5×4 |
| C | 4×6 | D | 5×2 |
| E | 3×7 | | |

4

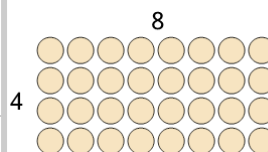
What multiplication equation would help you count the apples

- | | | | |
|---|--------------|---|--------------|
| A | 6×4 | B | 3×5 |
| C | 6×5 | D | 2×5 |
| E | 5×6 | | |

5


What multiplication equation would help you count the squares

- | | | | |
|---|--------------|---|--------------|
| A | 5×6 | B | 2×7 |
| C | 3×2 | D | 6×7 |
| E | 5×7 | | |

6

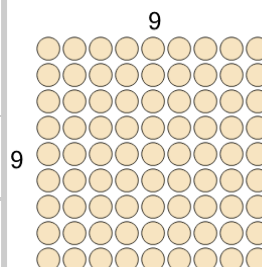
What multiplication equation would help you count the circles

- | | | | |
|---|--------------|---|--------------|
| A | 8×4 | B | 7×5 |
| C | 6×7 | D | 2×3 |
| | | | |

7

What multiplication equation would help you count the candies

- | | | | |
|---|--------------|---|--------------|
| A | 4×2 | B | 3×7 |
| C | 8×9 | D | 7×5 |
| E | 2×7 | | |

8

What multiplication equation would help you count the circles

- | | | | |
|---|--------------|---|--------------|
| A | 9×9 | B | 5×3 |
| C | 7×4 | D | 4×4 |
| E | 4×7 | | |