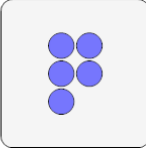
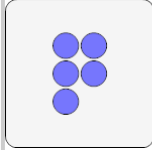


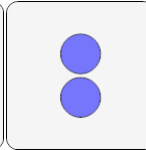



## Multiplication - From Picture to Answer

**1**



Use multiplication to count how many circles there are in total

A	10	B	12
C	2	D	13
E	14	F	15

**2**


Use multiplication to count how many circles there are in total

A	11	B	10
C	4	D	5
E	6	F	3

**3**

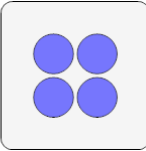
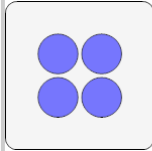
Use multiplication to count how many donuts there are in total

A	10	B	16
C	11	D	7
E	15	F	13

**4**



Use multiplication to count how many donuts there are in total

A	4	B	14
C	10	D	19
E	8	F	5

**5**

Use multiplication to count how many circles there are in total

A	6	B	8
C	3	D	12
E	14	F	4

**6**



Use multiplication to count how many candies there are in total

A	4	B	6
C	12	D	2
E	10	F	8

**7**

Use multiplication to count how many ice creams there are in total

A	3	B	1
C	4	D	9
E	6	F	12

**8**

Use multiplication to count how many apples there are in total

A	9	B	4
C	3	D	5
E	11	F	10