





Multiplication - From Picture to Answer



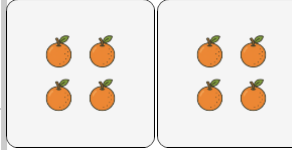
1



Use multiplication to count how many apples there are in total

A	10	B	5
C	9	D	4
E	3	F	11

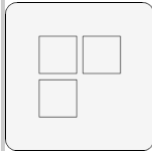
2



Use multiplication to count how many oranges there are in total

A	4	B	5
C	14	D	8
E	10	F	17


3



Use multiplication to count how many squares there are in total

A	18	B	10
C	15	D	12
E	11	F	20

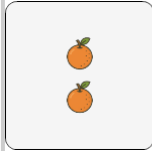
4



Use multiplication to count how many apples there are in total

A	6	B	3
C	7	D	8
E	10	F	4

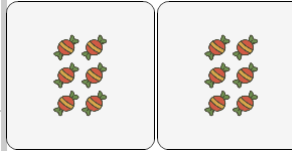
5



Use multiplication to count how many oranges there are in total

A	14	B	17
C	4	D	8
E	5	F	7


6



Use multiplication to count how many candies there are in total

A	18	B	34
C	6	D	38
E	24	F	42

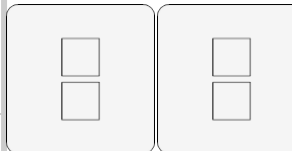
7



Use multiplication to count how many squares there are in total

A	7	B	24
C	21	D	16
E	22	F	15

8



Use multiplication to count how many squares there are in total

A	9	B	2
C	10	D	5
E	4	F	3