
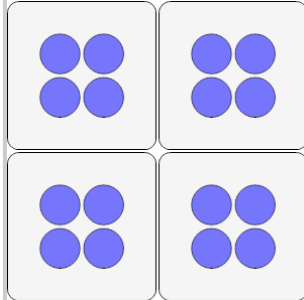


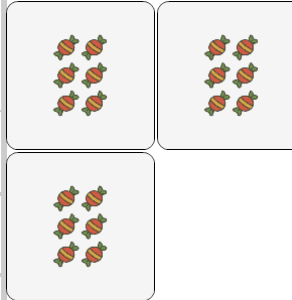


Multiplication - From Picture to Answer

**1**

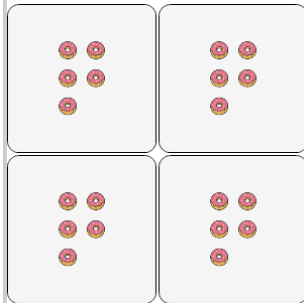
Use multiplication to count how many circles there are in total

A	12	B	18
C	16	D	14
E	10	F	24

2

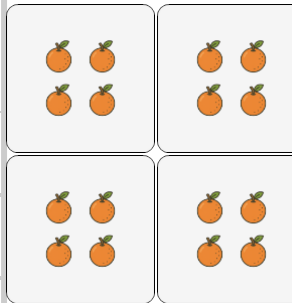
Use multiplication to count how many candies there are in total

A	18	B	12
C	26	D	27
E	14	F	20

3

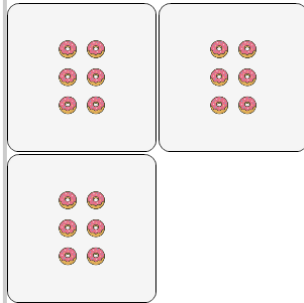
Use multiplication to count how many donuts there are in total

A	32	B	30
C	20	D	24
E	16	F	4

4

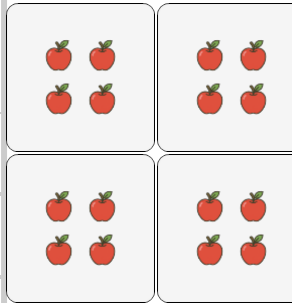
Use multiplication to count how many oranges there are in total

A	7	B	14
C	6	D	19
E	22	F	16

5


Use multiplication to count how many donuts there are in total

A	25	B	14
C	18	D	27
E	13	F	21

6

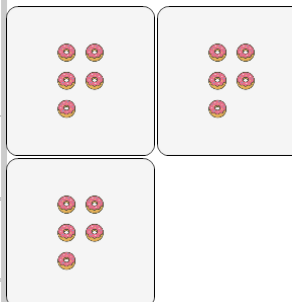
Use multiplication to count how many apples there are in total

A	12	B	10
C	16	D	20
E	24	F	14

7

Use multiplication to count how many ice creams there are in total

A	20	B	28
C	18	D	8
E	44	F	12

8

Use multiplication to count how many donuts there are in total

A	13	B	11
C	15	D	16
E	10	F	7