
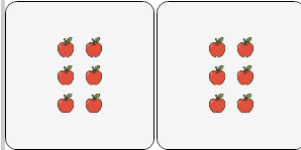


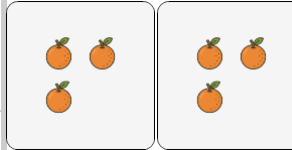


Multiplication - From Picture to Equation

**1**

What multiplication equation would help you count the apples

- | | | | |
|---|--------------|---|--------------|
| A | 3×2 | B | 4×5 |
| C | 3×5 | D | 7×4 |
| E | 2×6 | | |

2


What multiplication equation would help you count the oranges

- | | | | |
|---|--------------|---|--------------|
| A | 3×4 | B | 3×7 |
| C | 2×3 | D | 3×6 |
| E | 3×3 | | |

3

What multiplication equation would help you count the oranges

- | | | | |
|---|--------------|---|--------------|
| A | 6×2 | B | 6×4 |
| C | 2×3 | D | 3×4 |
| E | 2×2 | | |

4

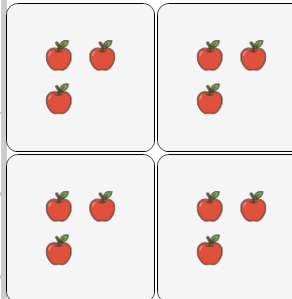
What multiplication equation would help you count the ice creams

- | | | | |
|---|--------------|---|--------------|
| A | 2×4 | B | 2×7 |
| C | 3×2 | D | 5×2 |
| E | 3×4 | | |

5

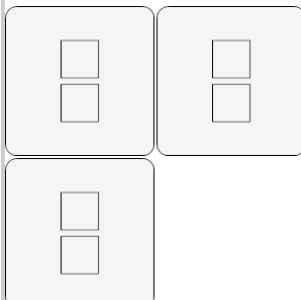
What multiplication equation would help you count the donuts

- | | | | |
|---|--------------|---|--------------|
| A | 2×4 | B | 7×5 |
| C | 7×4 | D | 3×3 |
| E | 4×7 | | |

6

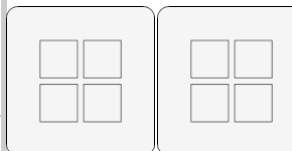
What multiplication equation would help you count the apples

- | | | | |
|---|--------------|---|--------------|
| A | 5×3 | B | 4×3 |
| C | 3×3 | D | 2×6 |
| E | 3×2 | | |

7

What multiplication equation would help you count the squares

- | | | | |
|---|--------------|---|--------------|
| A | 3×2 | B | 7×6 |
| C | 4×5 | D | 4×2 |
| E | 5×4 | | |

8

What multiplication equation would help you count the squares

- | | | | |
|---|--------------|---|--------------|
| A | 3×2 | B | 6×5 |
| C | 6×6 | D | 6×7 |
| E | 2×4 | | |