






Multiplication - From Picture to Equation

**1**

What multiplication equation would help you count the apples

A 5×6

B 3×5

C 3×2

D 6×7

E 2×5

2


What multiplication equation would help you count the ice creams

A 4×6

B 3×7

C 4×2

D 2×4

3

What multiplication equation would help you count the ice creams

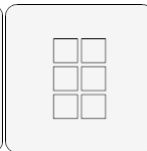
A 3×4

B 7×6

C 3×6

D 4×2

E 3×3

4

What multiplication equation would help you count the squares



A 5×2

B 3×7

C 2×7

D 5×7

E 3×6

5

What multiplication equation would help you count the apples

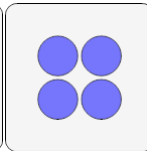
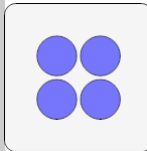
A 6×4

B 4×7

C 3×7

D 6×2

E 5×5

6

What multiplication equation would help you count the circles

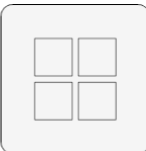

A 2×7

B 2×2

C 3×2

D 5×3

E 2×4

7

What multiplication equation would help you count the squares

A 5×4

B 7×4

C 4×4

D 4×5

E 7×2

8

What multiplication equation would help you count the ice creams

A 3×3

B 2×6

C 7×3

D 3×7

E 3×5