


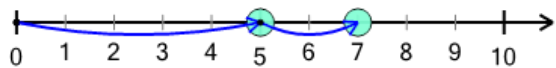
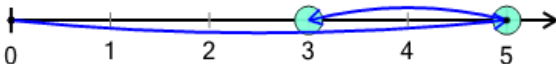


Number Line - Addition Positive Integers, Equation to Movement Image

**1**

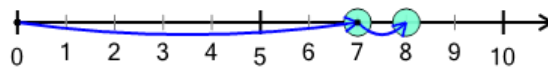
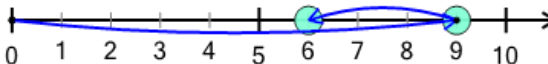
Which number line
shows this addition
equation?

$$5 + 2 = 7$$

A**B****2**

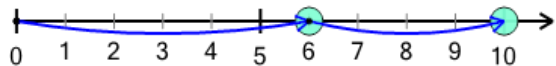
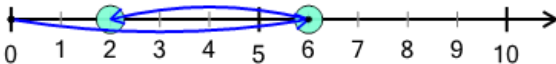
Which number line
shows this addition
equation?

$$7 + 1 = 8$$

A**B****3**

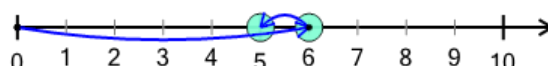
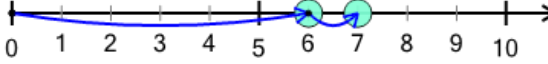
Which number line
shows this addition
equation?

$$6 + 4 = 10$$

A**B****4**

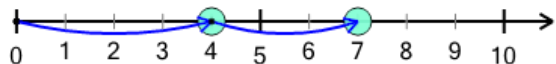
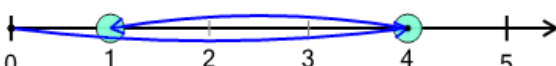
Which number line
shows this addition
equation?

$$6 + 1 = 7$$

A**B****5**

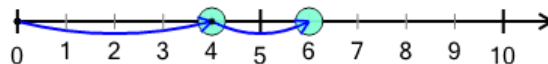
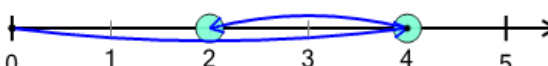
Which number line
shows this addition
equation?

$$4 + 3 = 7$$

A**B****6**

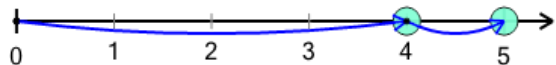
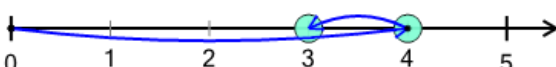
Which number line
shows this addition
equation?

$$4 + 2 = 6$$

A**B****7**

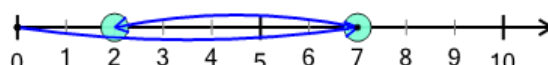
Which number line
shows this addition
equation?

$$4 + 1 = 5$$

A**B****8**

Which number line
shows this addition
equation?

$$5 + 3 = 8$$

A**B**