
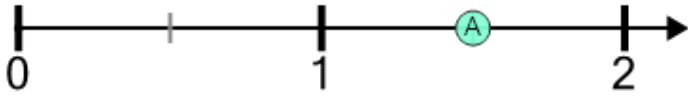




Number Line - Improper Fractions, Read Number - From Ticks

**1**

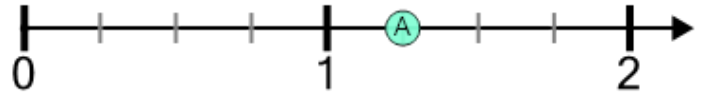
What fraction does this dot represent?



- | | | | | | |
|-----------------|-----------------|-----------------|-----------------|-----------------|-----------------|
| A $\frac{1}{5}$ | B $\frac{3}{2}$ | C $\frac{1}{3}$ | D $\frac{5}{6}$ | E $\frac{7}{6}$ | F $\frac{4}{5}$ |
|-----------------|-----------------|-----------------|-----------------|-----------------|-----------------|

2

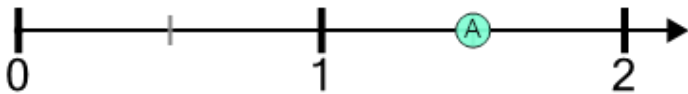
What fraction does this dot represent?



- | | | | | | |
|------------------|-----------------|-----------------|-----------------|-----------------|-----------------|
| A $\frac{3}{10}$ | B $\frac{4}{6}$ | C $\frac{5}{4}$ | D $\frac{4}{8}$ | E $\frac{8}{7}$ | F $\frac{3}{7}$ |
|------------------|-----------------|-----------------|-----------------|-----------------|-----------------|

3

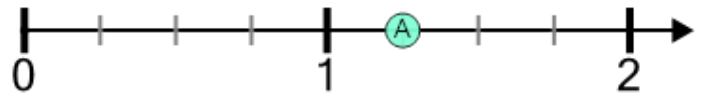
What fraction does this dot represent?



- | | | | | | |
|-----------------|-----------------|-----------------|-----------------|-----------------|-----------------|
| A $\frac{4}{6}$ | B $\frac{7}{4}$ | C $\frac{2}{5}$ | D $\frac{3}{2}$ | E $\frac{3}{5}$ | F $\frac{2}{6}$ |
|-----------------|-----------------|-----------------|-----------------|-----------------|-----------------|

4

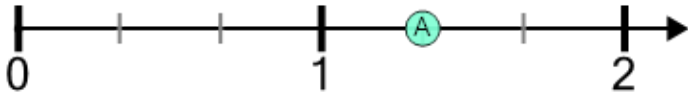
What fraction does this dot represent?



- | | | | | | |
|------------------|-----------------|-----------------|-------------------|-----------------|-----------------|
| A $\frac{3}{10}$ | B $\frac{3}{7}$ | C $\frac{5}{4}$ | D $\frac{11}{10}$ | E $\frac{5}{5}$ | F $\frac{9}{4}$ |
|------------------|-----------------|-----------------|-------------------|-----------------|-----------------|

5

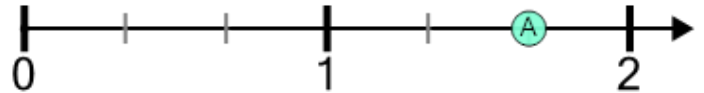
What fraction does this dot represent?



- | | | | | | |
|-----------------|-----------------|-----------------|-----------------|-----------------|-----------------|
| A $\frac{9}{9}$ | B $\frac{6}{4}$ | C $\frac{7}{3}$ | D $\frac{5}{6}$ | E $\frac{2}{5}$ | F $\frac{4}{3}$ |
|-----------------|-----------------|-----------------|-----------------|-----------------|-----------------|

6

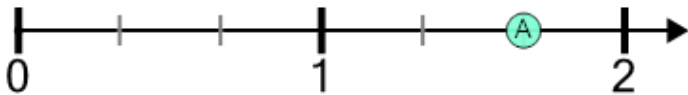
What fraction does this dot represent?



- | | | | | | |
|------------------|------------------|-----------------|------------------|-----------------|-----------------|
| A $\frac{10}{3}$ | B $\frac{11}{6}$ | C $\frac{4}{8}$ | D $\frac{10}{7}$ | E $\frac{5}{3}$ | F $\frac{1}{4}$ |
|------------------|------------------|-----------------|------------------|-----------------|-----------------|

7

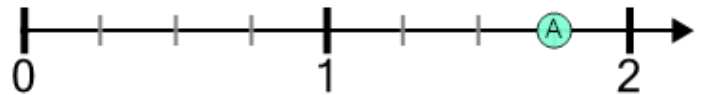
What fraction does this dot represent?



- | | | | | | |
|-----------------|-----------------|-----------------|-----------------|-----------------|-----------------|
| A $\frac{6}{6}$ | B $\frac{9}{5}$ | C $\frac{3}{5}$ | D $\frac{3}{4}$ | E $\frac{1}{7}$ | F $\frac{5}{3}$ |
|-----------------|-----------------|-----------------|-----------------|-----------------|-----------------|

8

What fraction does this dot represent?



- | | | | | | |
|-------------------|------------------|-----------------|------------------|-------------------|-----------------|
| A $\frac{13}{11}$ | B $\frac{3}{11}$ | C $\frac{7}{4}$ | D $\frac{15}{8}$ | E $\frac{11}{11}$ | F $\frac{4}{7}$ |
|-------------------|------------------|-----------------|------------------|-------------------|-----------------|