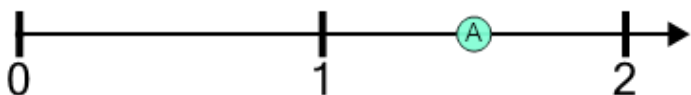




## Number Line - Large Decimals, Read Number - Approximate

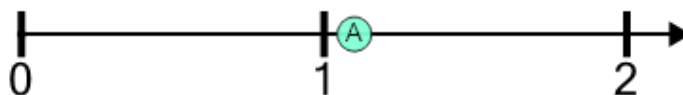


**1** What decimal would this dot be closest to?



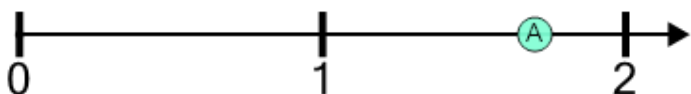
A	B	C	D	E	F
1.8	1.5	1.2	2.4	1.4	1.6

**2** What decimal would this dot be closest to?



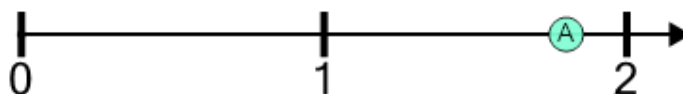
A	B	C	D	E	F
1.5	2	1.6	1.1	0.4	0.1

**3** What decimal would this dot be closest to?



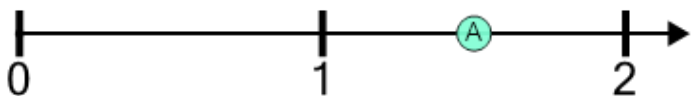
A	B	C	D	E	F
1.6	1.7	1.3	1.2	1.8	1.4

**4** What decimal would this dot be closest to?



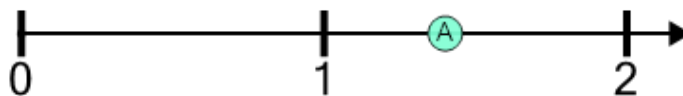
A	B	C	D	E	F
1.2	1.4	1.9	1.8	1.6	1

**5** What decimal would this dot be closest to?



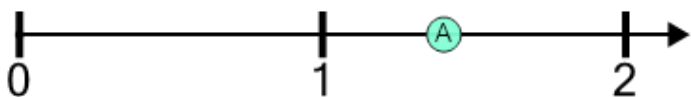
A	B	C	D	E	F
1.2	1.5	1.7	0.7	2.3	1.6

**6** What decimal would this dot be closest to?



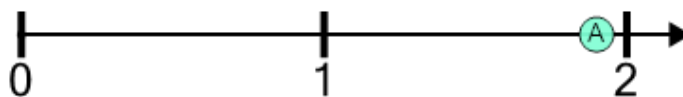
A	B	C	D	E	F
0.9	1.2	1.5	1.4	1.6	0.4

**7** What decimal would this dot be closest to?



A	B	C	D	E	F
1.5	2	1.4	2.3	0.7	1.9

**8** What decimal would this dot be closest to?



A	B	C	D	E	F
1.4	1.9	2.3	2.6	2.2	2.5