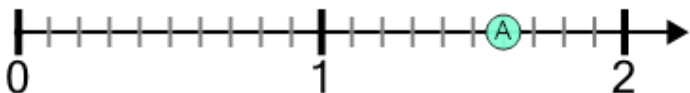




Number Line - Large Decimals, Read Number - From Ticks

1

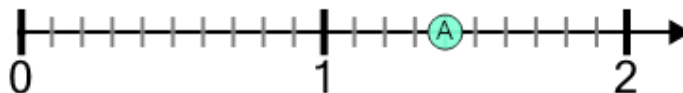
What decimal does this dot represent?



| A | B | C | D | E | F |
|-----|-----|-----|---|-----|-----|
| 1.8 | 1.1 | 1.6 | 2 | 1.2 | 2.1 |

2

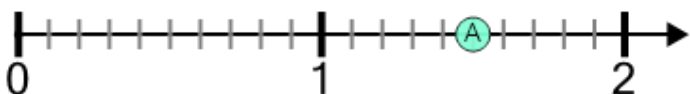
What decimal does this dot represent?



| A | B | C | D | E | F |
|-----|-----|-----|---|-----|-----|
| 1.1 | 1.8 | 1.4 | 1 | 0.8 | 0.9 |

3

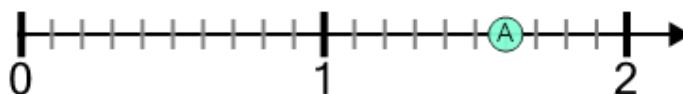
What decimal does this dot represent?



| A | B | C | D | E | F |
|-----|-----|-----|-----|---|-----|
| 1.5 | 1.2 | 1.6 | 0.7 | 1 | 0.8 |

4

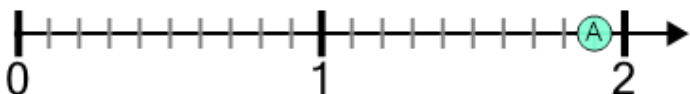
What decimal does this dot represent?



| A | B | C | D | E | F |
|-----|-----|-----|-----|-----|-----|
| 0.8 | 1.3 | 1.6 | 2.5 | 0.6 | 2.4 |

5

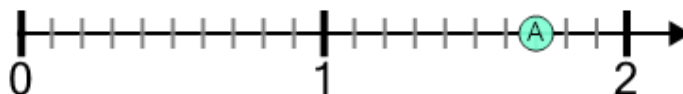
What decimal does this dot represent?



| A | B | C | D | E | F |
|-----|-----|-----|---|-----|-----|
| 1.3 | 2.5 | 1.9 | 1 | 1.7 | 1.5 |

6

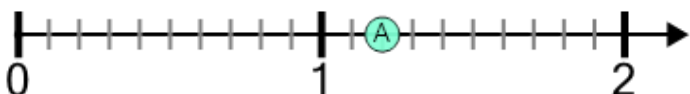
What decimal does this dot represent?



| A | B | C | D | E | F |
|-----|-----|---|-----|-----|-----|
| 2.5 | 1.3 | 2 | 0.9 | 1.4 | 1.7 |

7

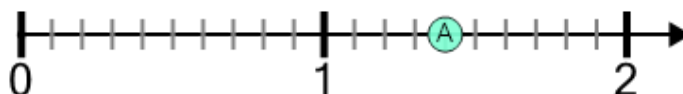
What decimal does this dot represent?



| A | B | C | D | E | F |
|-----|-----|-----|-----|-----|-----|
| 0.8 | 0.5 | 0.4 | 1.5 | 1.2 | 2.1 |

8

What decimal does this dot represent?



| A | B | C | D | E | F |
|-----|-----|-----|---|-----|-----|
| 0.5 | 2.2 | 1.1 | 2 | 1.2 | 1.4 |