

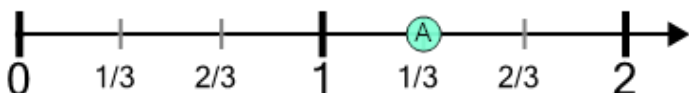


Number Line - Mixed Fractions (Not Simplified), Read Number - Labelled



1

What fraction does this dot represent?



- | | | | | | |
|------------------|------------------|------------------|------------------|------------------|------------------|
| A $3\frac{3}{6}$ | B $3\frac{3}{4}$ | C $1\frac{3}{4}$ | D $1\frac{1}{3}$ | E $7\frac{7}{8}$ | F $6\frac{6}{7}$ |
|------------------|------------------|------------------|------------------|------------------|------------------|

2

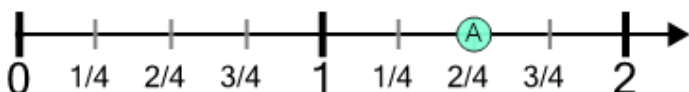
What fraction does this dot represent?



- | | | | | | |
|------------------|------------------|------------------|------------------|------------------|-------|
| A $1\frac{1}{4}$ | B $1\frac{1}{8}$ | C $2\frac{3}{4}$ | D $6\frac{6}{9}$ | E $1\frac{2}{3}$ | F 1 |
|------------------|------------------|------------------|------------------|------------------|-------|

3

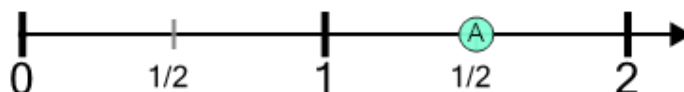
What fraction does this dot represent?



- | | | | | | |
|------------------|-------|------------------|------------------|------------------|------------------|
| A $1\frac{2}{6}$ | B 1 | C $1\frac{2}{4}$ | D $1\frac{1}{4}$ | E $6\frac{6}{8}$ | F $4\frac{4}{5}$ |
|------------------|-------|------------------|------------------|------------------|------------------|

4

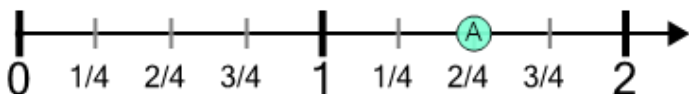
What fraction does this dot represent?



- | | | | | | |
|------------------|------------------|------------------|------------------|------------------|------------------|
| A $1\frac{2}{5}$ | B $3\frac{3}{6}$ | C $1\frac{1}{2}$ | D $1\frac{1}{6}$ | E $2\frac{1}{3}$ | F $1\frac{1}{7}$ |
|------------------|------------------|------------------|------------------|------------------|------------------|

5

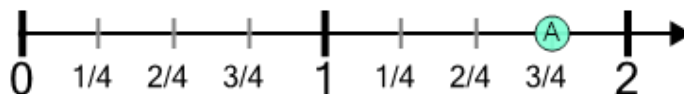
What fraction does this dot represent?



- | | | | | | |
|------------------|-------------------|------------------|-------|------------------|------------------|
| A $1\frac{2}{4}$ | B $2\frac{2}{11}$ | C $1\frac{2}{8}$ | D 1 | E $7\frac{7}{9}$ | F $2\frac{3}{4}$ |
|------------------|-------------------|------------------|-------|------------------|------------------|

6

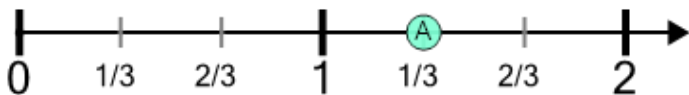
What fraction does this dot represent?



- | | | | | | |
|------------------|------------------|------------------|------------------|------------------|------------------|
| A $4\frac{4}{6}$ | B $1\frac{5}{6}$ | C $2\frac{2}{5}$ | D $1\frac{5}{8}$ | E $1\frac{3}{4}$ | F $1\frac{6}{7}$ |
|------------------|------------------|------------------|------------------|------------------|------------------|

7

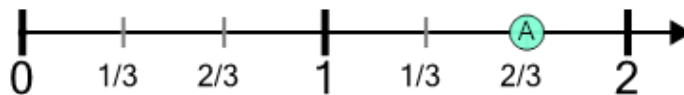
What fraction does this dot represent?



- | | | | | | |
|------------------|------------------|------------------|------------------|------------------|------------------|
| A $5\frac{5}{8}$ | B $1\frac{1}{3}$ | C $1\frac{1}{9}$ | D $3\frac{3}{9}$ | E $4\frac{4}{9}$ | F $4\frac{4}{5}$ |
|------------------|------------------|------------------|------------------|------------------|------------------|

8

What fraction does this dot represent?



- | | | | | | |
|------------------|------------------|------------------|------------------|------------------|------------------|
| A $1\frac{2}{3}$ | B $1\frac{2}{5}$ | C $6\frac{6}{9}$ | D $6\frac{6}{8}$ | E $1\frac{1}{6}$ | F $1\frac{3}{5}$ |
|------------------|------------------|------------------|------------------|------------------|------------------|