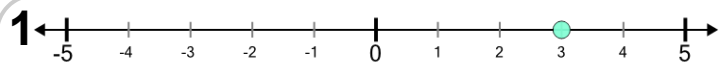


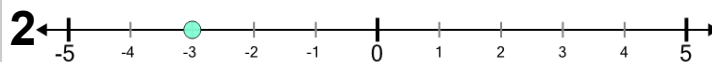


Number Line - Negative Integers, Read Number - Labelled



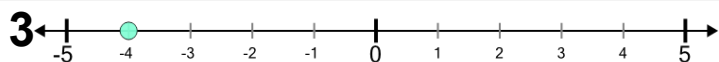
What number does is this dot at?

| | | | | |
|---|----|---|----|----|
| A | B | C | D | E |
| 0 | -3 | 3 | -5 | -1 |



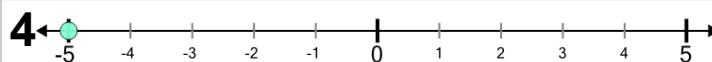
What number does is this dot at?

| | | | | | |
|---|----|---|----|---|----|
| A | B | C | D | E | F |
| 4 | -3 | 2 | -5 | 3 | -1 |



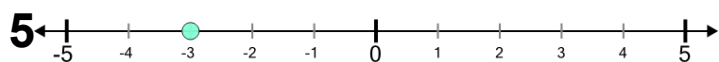
What number does is this dot at?

| | | | | | |
|---|---|----|---|---|---|
| A | B | C | D | E | F |
| 0 | 2 | -4 | 3 | 1 | 4 |



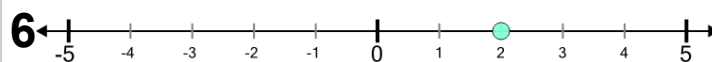
What number does is this dot at?

| | | | | | |
|----|---|---|----|----|---|
| A | B | C | D | E | F |
| -5 | 2 | 3 | -2 | -1 | 4 |



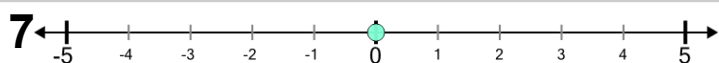
What number does is this dot at?

| | | | |
|----|----|---|----|
| A | B | C | D |
| -1 | -5 | 4 | -3 |



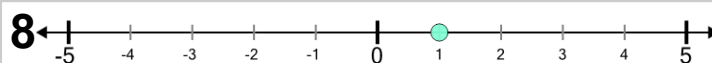
What number does is this dot at?

| | | | | |
|----|----|----|---|---|
| A | B | C | D | E |
| -5 | -3 | -1 | 0 | 2 |



What number does is this dot at?

| | | | | |
|---|----|---|---|---|
| A | B | C | D | E |
| 4 | -5 | 2 | 3 | 0 |



What number does is this dot at?

| | | | | | |
|---|----|----|----|----|---|
| A | B | C | D | E | F |
| 4 | -3 | -1 | -2 | -4 | 1 |