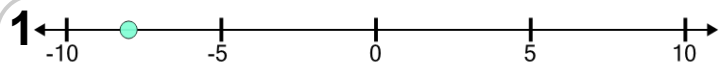


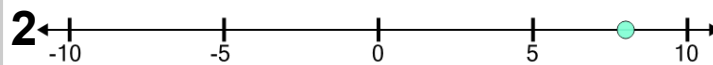


Number Line - Negative Integers, Read Number - Approximate



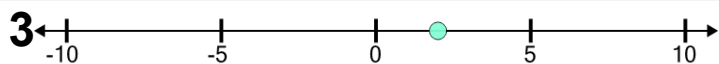
What number would this dot be closest to?

A	B	C	D	E	F
-4	1	4	5	9	-8



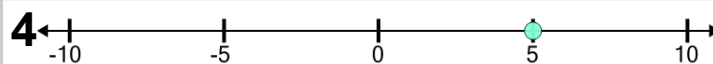
What number would this dot be closest to?

A	B	C	D	E	F
5	-1	3	-2	8	0



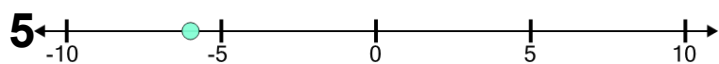
What number would this dot be closest to?

A	B	C	D	E	F
-2	2	-7	-3	-1	8



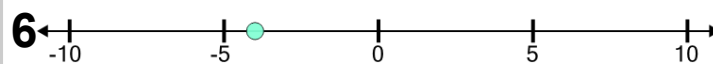
What number would this dot be closest to?

A	B	C	D	E	F
-6	2	-8	3	7	5



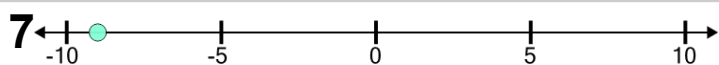
What number would this dot be closest to?

A	B	C	D	E	F
-9	-6	4	0	8	5



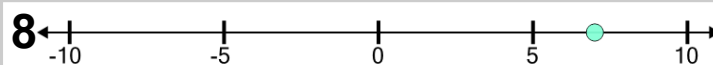
What number would this dot be closest to?

A	B	C	D	E	F
6	-7	-1	-4	3	0



What number would this dot be closest to?

A	B	C	D	E
-4	-7	-9	9	-5



What number would this dot be closest to?

A	B	C	D	E	F
-3	9	0	7	5	1