
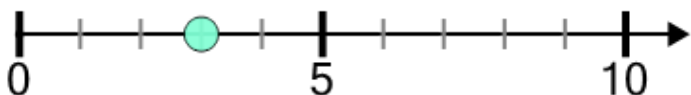




## Number Line - Positive Integers, Read Number - From Ticks

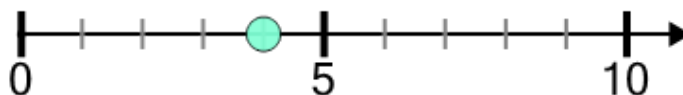


**1** What number does is this dot at?



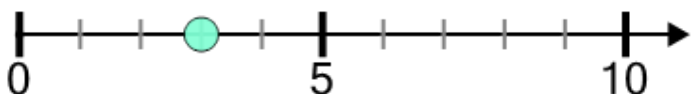
- |   |   |   |   |   |
|---|---|---|---|---|
| A | B | C | D | E |
| 8 | 3 | 0 | 5 | 1 |

**2** What number does is this dot at?



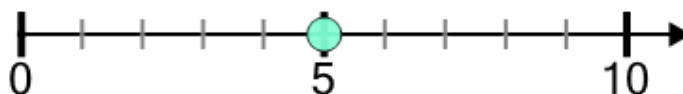
- |   |   |   |   |   |   |
|---|---|---|---|---|---|
| A | B | C | D | E | F |
| 8 | 7 | 0 | 6 | 4 | 1 |

**3** What number does is this dot at?



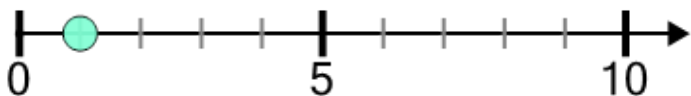
- |   |   |   |   |   |   |
|---|---|---|---|---|---|
| A | B | C | D | E | F |
| 7 | 1 | 3 | 8 | 9 | 5 |

**4** What number does is this dot at?



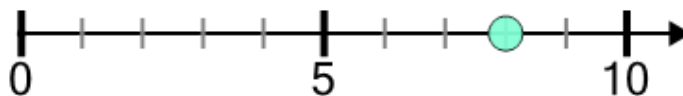
- |   |   |   |   |   |
|---|---|---|---|---|
| A | B | C | D | E |
| 3 | 9 | 1 | 7 | 5 |

**5** What number does is this dot at?



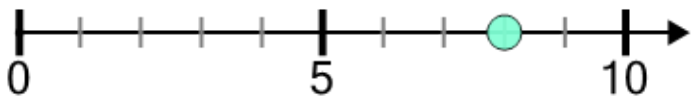
- |   |   |   |   |
|---|---|---|---|
| A | B | C | D |
| 1 | 8 | 4 | 7 |

**6** What number does is this dot at?



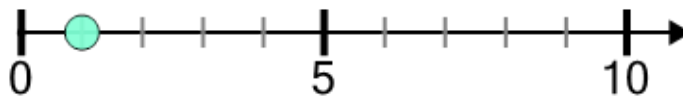
- |   |   |   |   |   |
|---|---|---|---|---|
| A | B | C | D | E |
| 6 | 3 | 0 | 8 | 1 |

**7** What number does is this dot at?



- |   |   |   |   |
|---|---|---|---|
| A | B | C | D |
| 1 | 4 | 0 | 8 |

**8** What number does is this dot at?



- |   |   |   |
|---|---|---|
| A | B | C |
| 1 | 8 | 5 |