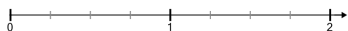


## Number Line - Improper Fractions (Even Tick Marks), Interval Spacing - Name

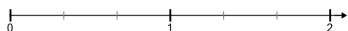
### Denominator to Number Line

1

Which number line has a whole number divided into fourths?



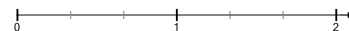
B



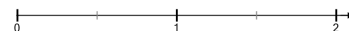
2

Which number line has a whole number divided into halves?

A



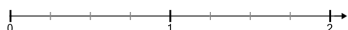
B



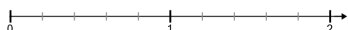
3

Which number line has a whole number divided into quarters?

A



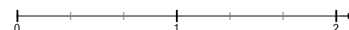
B



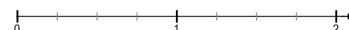
4

Which number line has a whole number divided into thirds?

A



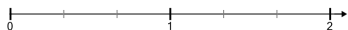
B



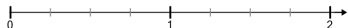
5

Which number line has a whole number divided into thirds?

A



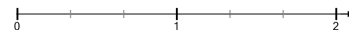
B



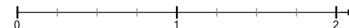
6

Which number line has a whole number divided into thirds?

A



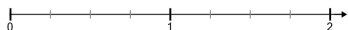
B



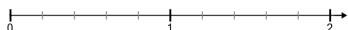
7

Which number line has a whole number divided into quarters?

A



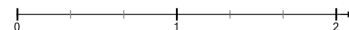
B



8

Which number line has a whole number divided into halves?

A



B

