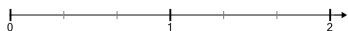
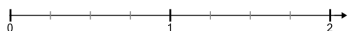
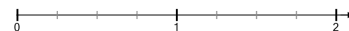
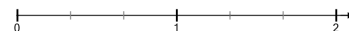




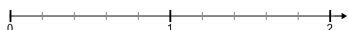
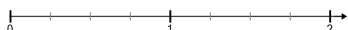
Number Line - Improper Fractions (Uneven Tick Marks), Interval Spacing - Count Intervals to Number Line

1

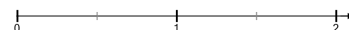
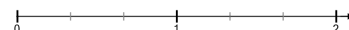
Which number line has
a whole number divided
into 4 intervals?

**B****A****B****3**

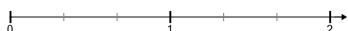
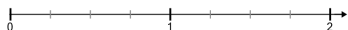
Which number line has
a whole number divided
into 4 intervals?

**B****4**

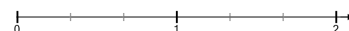
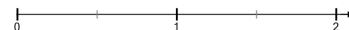
Which number line has
a whole number divided
into 3 intervals?

**B****5**

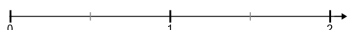
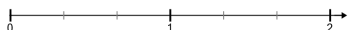
Which number line has
a whole number divided
into 4 intervals?

**B****6**

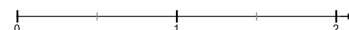
Which number line has
a whole number divided
into 2 intervals?

**B****7**

Which number line has
a whole number divided
into 3 intervals?

**B****8**

Which number line has
a whole number divided
into 3 intervals?

**B**