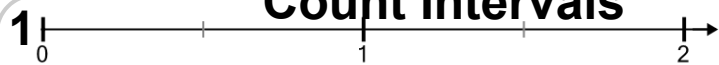
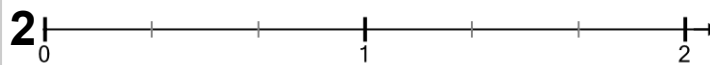


Number Line - Improper Fractions (Uneven Tick Marks), Interval Spacing - Count Intervals



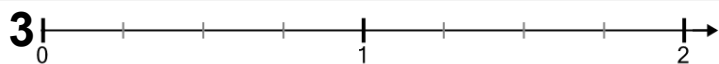
How many intervals is each whole number split into?

A	B	C	D	E	F
4	8	7	2	6	3



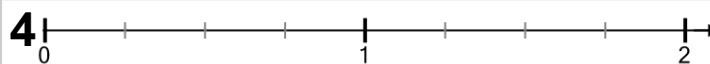
How many intervals is each whole number split into?

A	B	C	D	E
5	8	2	7	3



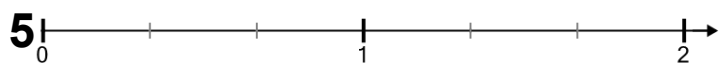
How many intervals is each whole number split into?

A	B	C	D	E
4	9	2	6	7



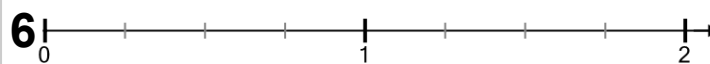
How many intervals is each whole number split into?

A	B	C	D	E	F
3	4	7	6	9	8



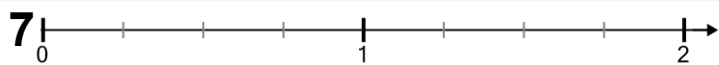
How many intervals is each whole number split into?

A	B	C	D	E	F
9	5	3	4	8	7



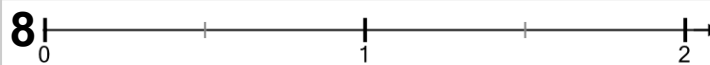
How many intervals is each whole number split into?

A	B	C	D	E	F
5	2	9	4	7	8



How many intervals is each whole number split into?

A	B	C	D	E
9	2	4	6	8



How many intervals is each whole number split into?

A	B	C	D	E	F
6	3	5	8	7	2