
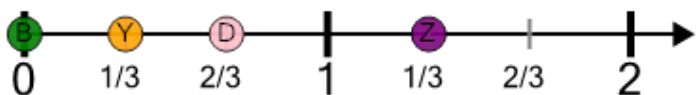





Number Line - Improper Fractions, Select Dot - Labelled



1

What dot is at $4/3$?

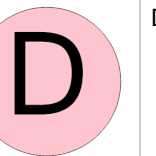
A



B



C




D



2

What dot is at $7/4$?

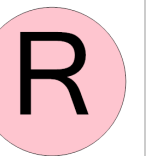
A



B



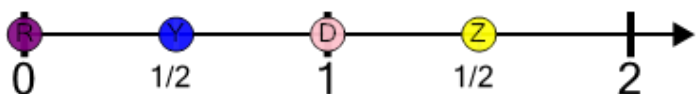
C



D




3

What dot is at $3/2$?

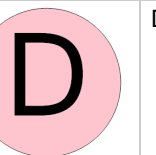
A



B



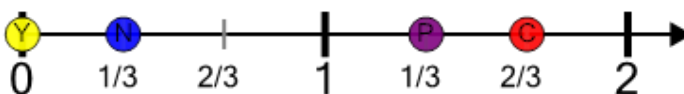
C




D




4

What dot is at $4/3$?

A



B



C



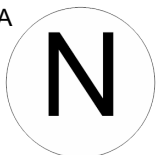
D




5

What dot is at $3/2$?

A




B



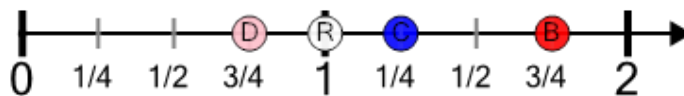
C



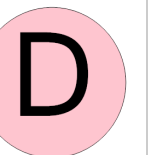
D




6

What dot is at $7/4$?


A



B



C



D



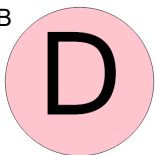
7

What dot is at $5/4$?

A




B



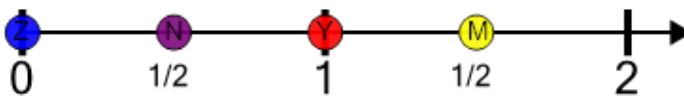
C



D




8

What dot is at $3/2$?

A



B



C



D

