


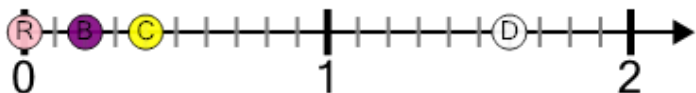


Number Line - Large Decimals, Select Dot - From Ticks



1

Which dot is at 1.6?



A

R

B

B

C

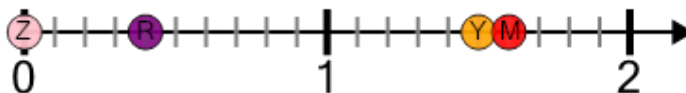
C

D

D

2

Which dot is at 1.5?



A

Z

B

R

C

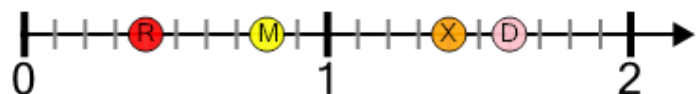
Y

D

M

3

Which dot is at 1.4?



A

R

B

M

C

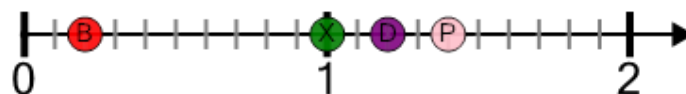
X

D

D

4

Which dot is at 1.4?



A

B

B

X

C

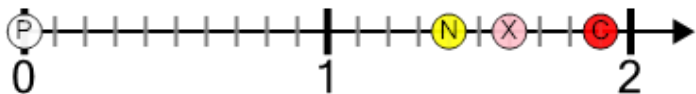
D

D

P

5

Which dot is at 1.9?



A

P

B

N

C

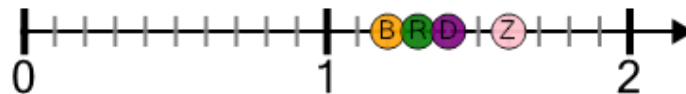
X

D

C

6

Which dot is at 1.3?



A

B

B

R

C

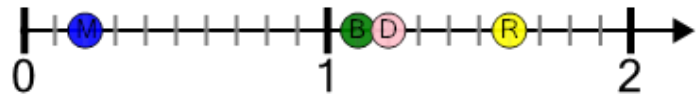
D

D

Z

7

Which dot is at 1.1?



A

M

B

B

C

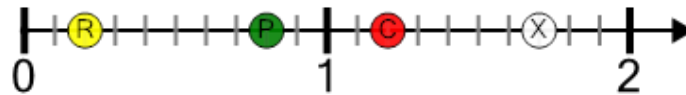
D

D

R

8

Which dot is at 1.7?



A

R

B

P

C

C

D

X