
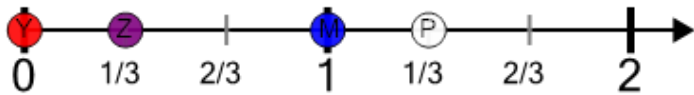




Number Line - Mixed Fractions, Select Dot - Labelled



1

What dot is at $1 \frac{1}{3}$?


A



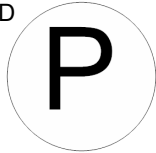
B



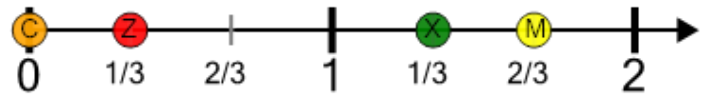
C




D




2

What dot is at $1 \frac{2}{3}$?


A



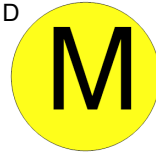
B



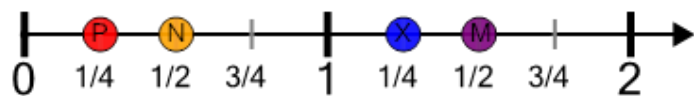
C



D




3

What dot is at $1 \frac{1}{2}$?


A



B



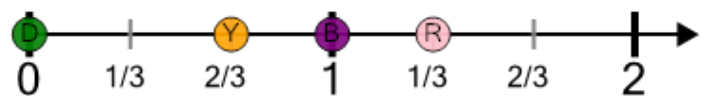
C




D



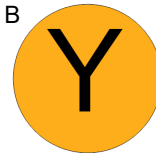
4

What dot is at $1 \frac{1}{3}$?


A



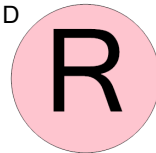
B



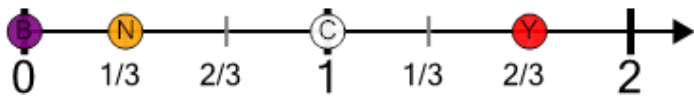
C



D




5

What dot is at $1 \frac{2}{3}$?


A



B



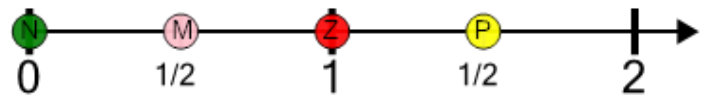
C



D



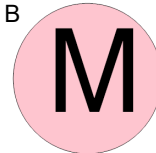
6

What dot is at $1 \frac{1}{2}$?


A



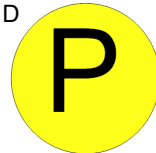
B



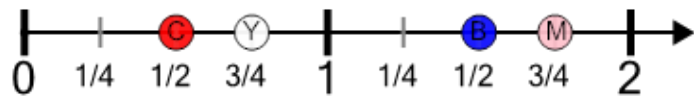
C




D



7

What dot is at $1 \frac{3}{4}$?


A



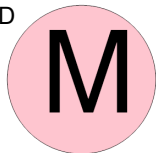
B



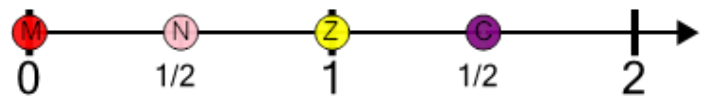
C




D



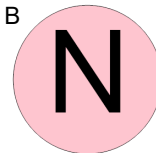
8

What dot is at $1 \frac{1}{2}$?

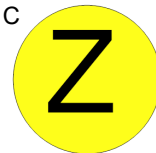
A



B



C



D

