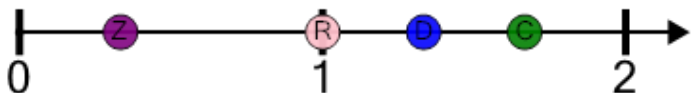




## Number Line - Mixed Fractions, Select Dot - Approximate

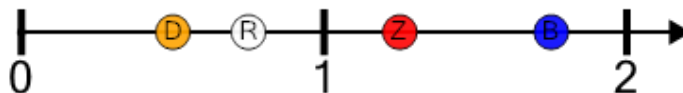


1 What dot would be closest to  $1 \frac{1}{3}$ ?



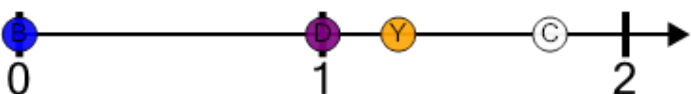
A	B	C	D
---	---	---	---

2 What dot would be closest to  $1 \frac{1}{4}$ ?



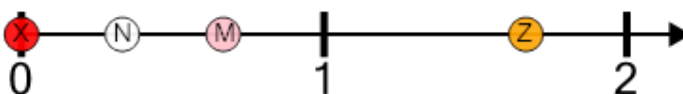
A	B	C	D
---	---	---	---

3 What dot would be closest to  $1 \frac{3}{4}$ ?



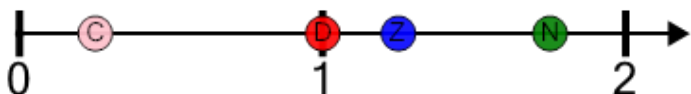
A	B	C	D
---	---	---	---

4 What dot would be closest to  $1 \frac{2}{3}$ ?



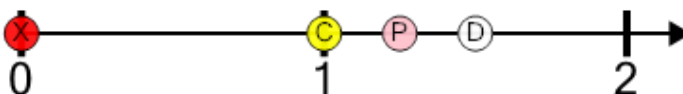
A	B	C	D
---	---	---	---

5 What dot would be closest to  $1 \frac{3}{4}$ ?



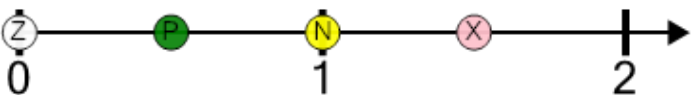
A	B	C	D
---	---	---	---

6 What dot would be closest to  $1 \frac{1}{2}$ ?



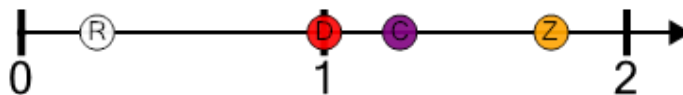
A	B	C	D
---	---	---	---

7 What dot would be closest to  $1 \frac{1}{2}$ ?



A	B	C	D
---	---	---	---

8 What dot would be closest to  $1 \frac{1}{4}$ ?



A	B	C	D
---	---	---	---