





Number Line - Mixed Fractions, Select Dot - From Ticks



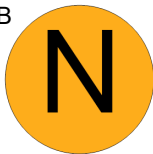
1

What dot is at $1 \frac{1}{2}$?

A



B



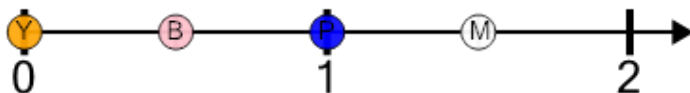
C




D



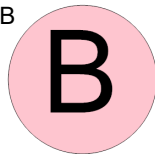
2

What dot is at $1 \frac{1}{2}$?

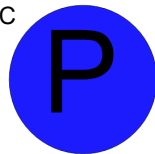
A



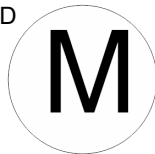
B



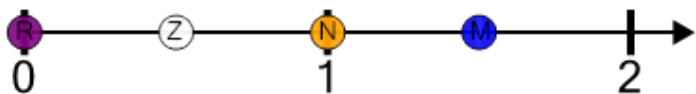
C



D



3

What dot is at $1 \frac{1}{2}$?


A




B



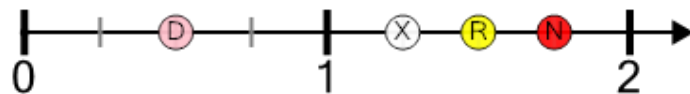
C



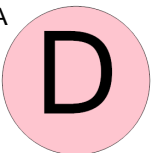
D



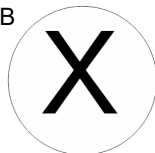
4

What dot is at $1 \frac{1}{4}$?

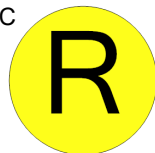
A




B



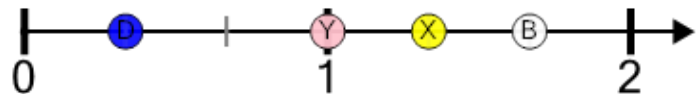
C




D



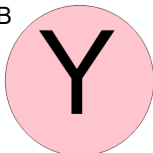
5

What dot is at $1 \frac{2}{3}$?

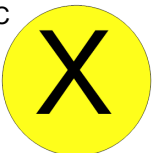
A




B



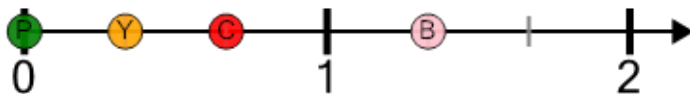
C



D



6

What dot is at $1 \frac{1}{3}$?


A



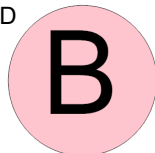
B



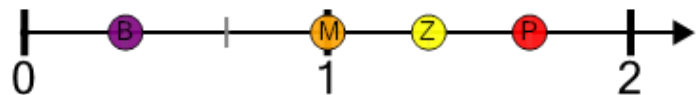
C




D



7

What dot is at $1 \frac{2}{3}$?

A



B



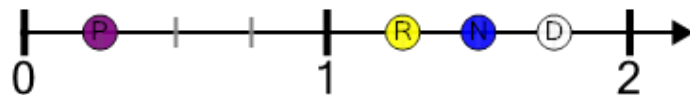
C



D




8

What dot is at $1 \frac{1}{2}$?


A



B



C



D

