


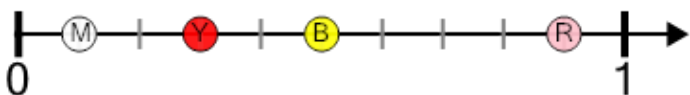


## Number Line - Small Decimals, Select Dot - From Ticks



1

Which dot is at 0.9?



A

M

B

Y

C

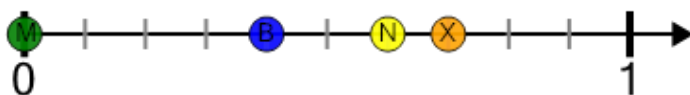
B

D

R

2

Which dot is at 0.6?



A

M

B

B

C

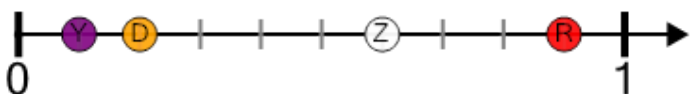
N

D

X

3

Which dot is at 0.1?



A

Y

B

D

C

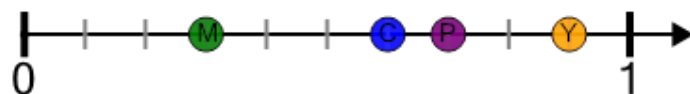
Z

D

R

4

Which dot is at 0.7?



A

M

B

C

C

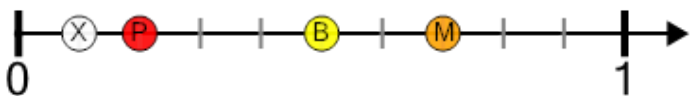
P

D

Y

5

Which dot is at 0.2?



A

X

B

P

C

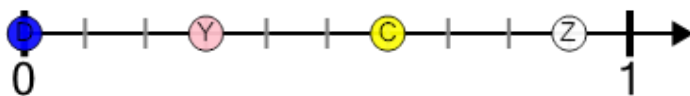
B

D

M

6

Which dot is at 0.3?



A

D

B

Y

C

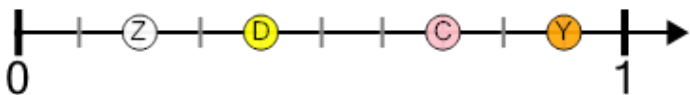
C

D

Z

7

Which dot is at 0.4?



A

Z

B

D

C

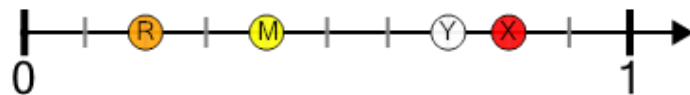
C

D

Y

8

Which dot is at 0.4?



A

R

B

M

C

Y

D

X