

## Number Line - Simple Fractions (Uneven Tick Marks), Interval Spacing - Count Intervals to Number Line

1

Which number line has a whole number divided into 3 intervals?



B




2

Which number line has a whole number divided into 6 intervals?

A



B



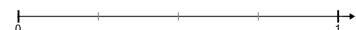
3

Which number line has a whole number divided into 3 intervals?

A



B



4

Which number line has a whole number divided into 6 intervals?

A



B



5

Which number line has a whole number divided into 4 intervals?

A



B



6

Which number line has a whole number divided into 2 intervals?

A



B




7

Which number line has a whole number divided into 5 intervals?

A



B



8

Which number line has a whole number divided into 4 intervals?

A



B

